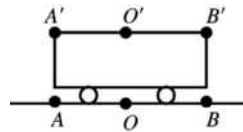


## RELATIVITY

- 37.1. IDENTIFY and SET UP:** Consider the distance  $A$  to  $O'$  and  $B$  to  $O'$  as observed by an observer on the ground (Figure 37.1).



**Figure 37.1**

**EXECUTE:** Simultaneous to observer on train means light pulses from  $A'$  and  $B'$  arrive at  $O'$  at the same time. To observer at  $O$  light from  $A'$  has a longer distance to travel than light from  $B'$  so  $O$  will conclude that the pulse from  $A(A')$  started before the pulse at  $B(B')$ . To observer at  $O$  bolt  $A$  appeared to strike first.

**EVALUATE:** Section 37.2 shows that if they are simultaneous to the observer on the ground then an observer on the train measures that the bolt at  $B'$  struck first.

- 37.2. IDENTIFY:** Apply Eq. (37.8).

**SET UP:** The lifetime measured in the muon frame is the proper time  $\Delta t_0$ .  $u = 0.900c$  is the speed of the muon frame relative to the laboratory frame. The distance the particle travels in the lab frame is its speed in that frame times its lifetime in that frame.

**EXECUTE: (a)**  $\gamma = \frac{1}{\sqrt{1 - (0.9)^2}} = 2.29$ .  $\Delta t = \gamma \Delta t_0 = (2.29)(2.20 \times 10^{-6} \text{ s}) = 5.05 \times 10^{-6} \text{ s}$ .

**(b)**  $d = v \Delta t = (0.900)(3.00 \times 10^8 \text{ m/s})(5.05 \times 10^{-6} \text{ s}) = 1.36 \times 10^3 \text{ m} = 1.36 \text{ km}$ .

**EVALUATE:** The lifetime measured in the lab frame is larger than the lifetime measured in the muon frame.

- 37.3. IDENTIFY and SET UP:** The problem asks for  $u$  such that  $\Delta t_0 / \Delta t = \frac{1}{2}$ .

**EXECUTE:**  $\Delta t = \frac{\Delta t_0}{\sqrt{1 - u^2/c^2}}$  gives  $u = c \sqrt{1 - (\Delta t_0 / \Delta t)^2} = (3.00 \times 10^8 \text{ m/s}) \sqrt{1 - \left(\frac{1}{2}\right)^2} = 2.60 \times 10^8 \text{ m/s}$ ;

$$\frac{u}{c} = 0.867$$

Jet planes fly at less than ten times the speed of sound, less than about 3000 m/s. Jet planes fly at much lower speeds than we calculated for  $u$ .

- 37.4. IDENTIFY:** Time dilation occurs because the rocket is moving relative to Mars.

**SET UP:** The time dilation equation is  $\Delta t = \gamma \Delta t_0$ , where  $t_0$  is the proper time.

**EXECUTE: (a)** The two time measurements are made at the same place on Mars by an observer at rest there, so the observer on Mars measures the proper time.

$$(b) \Delta t = \gamma \Delta t_0 = \frac{1}{\sqrt{1 - (0.985)^2}} (75.0 \mu s) = 435 \mu s$$

**EVALUATE:** The pulse lasts for a shorter time relative to the rocket than it does relative to the Mars observer.

- 37.5. (a) IDENTIFY and SET UP:**  $\Delta t_0 = 2.60 \times 10^{-8} \text{ s}$ ;  $\Delta t = 4.20 \times 10^{-7} \text{ s}$ . In the lab frame the pion is created and decays at different points, so this time is not the proper time.

$$\text{EXECUTE: } \Delta t = \frac{\Delta t_0}{\sqrt{1 - u^2/c^2}} \text{ says } 1 - \frac{u^2}{c^2} = \left( \frac{\Delta t_0}{\Delta t} \right)^2$$

$$\frac{u}{c} = \sqrt{1 - \left( \frac{\Delta t_0}{\Delta t} \right)^2} = \sqrt{1 - \left( \frac{2.60 \times 10^{-8} \text{ s}}{4.20 \times 10^{-7} \text{ s}} \right)^2} = 0.998; u = 0.998c$$

**EVALUATE:**  $u < c$ , as it must be, but  $u/c$  is close to unity and the time dilation effects are large.

**(b) IDENTIFY and SET UP:** The speed in the laboratory frame is  $u = 0.998c$ ; the time measured in this frame is  $\Delta t$ , so the distance as measured in this frame is  $d = u\Delta t$ .

$$\text{EXECUTE: } d = (0.998)(2.998 \times 10^8 \text{ m/s})(4.20 \times 10^{-7} \text{ s}) = 126 \text{ m}$$

**EVALUATE:** The distance measured in the pion's frame will be different because the time measured in the pion's frame is different (shorter).

- 37.6. IDENTIFY:** Apply Eq. (37.8).

**SET UP:** For part (a) the proper time is measured by the race pilot.  $\gamma = 1.667$ .

$$\text{EXECUTE: (a) } \Delta t = \frac{1.20 \times 10^8 \text{ m}}{(0.800)(3.00 \times 10^8 \text{ m/s})} = 0.500 \text{ s. } \Delta t_0 = \frac{\Delta t}{\gamma} = \frac{0.500 \text{ s}}{1.667} = 0.300 \text{ s.}$$

$$(b) (0.300 \text{ s})(0.800c) = 7.20 \times 10^7 \text{ m.}$$

$$(c) \text{ You read } \frac{1.20 \times 10^8 \text{ m}}{(0.800)(3 \times 10^8 \text{ m/s})} = 0.500 \text{ s.}$$

**EVALUATE:** The two events are the spaceracer passing you and the spaceracer reaching a point  $1.20 \times 10^8 \text{ m}$  from you. The timer traveling with the spaceracer measures the proper time between these two events.

- 37.7. IDENTIFY and SET UP:** A clock moving with respect to an observer appears to run more slowly than a clock at rest in the observer's frame. The clock in the spacecraft measures the proper time  $\Delta t_0$ .

$$\Delta t = 365 \text{ days} = 8760 \text{ hours.}$$

**EXECUTE:** The clock on the moving spacecraft runs slow and shows the smaller elapsed time.

$$\Delta t_0 = \Delta t \sqrt{1 - u^2/c^2} = (8760 \text{ h}) \sqrt{1 - (4.80 \times 10^6 / 3.00 \times 10^8)^2} = 8758.88 \text{ h. The difference in elapsed times is } 8760 \text{ h} - 8758.88 \text{ h} = 1.12 \text{ h.}$$

- 37.8. IDENTIFY and SET UP:** The proper time is measured in the frame where the two events occur at the same point.

**EXECUTE: (a)** The time of 12.0 ms measured by the first officer on the craft is the proper time.

$$(b) \Delta t = \frac{\Delta t_0}{\sqrt{1 - u^2/c^2}} \text{ gives } u = c \sqrt{1 - (\Delta t_0/\Delta t)^2} = c \sqrt{1 - (12.0 \times 10^{-3} / 0.190)^2} = 0.998c.$$

**EVALUATE:** The observer at rest with respect to the searchlight measures a much shorter duration for the event.

- 37.9. IDENTIFY and SET UP:**  $l = l_0 \sqrt{1 - u^2/c^2}$ . The length measured when the spacecraft is moving is  $l = 74.0 \text{ m}$ ;  $l_0$  is the length measured in a frame at rest relative to the spacecraft.

$$\text{EXECUTE: } l_0 = \frac{l}{\sqrt{1 - u^2/c^2}} = \frac{74.0 \text{ m}}{\sqrt{1 - (0.600c/c)^2}} = 92.5 \text{ m.}$$

**EVALUATE:**  $l_0 > l$ . The moving spacecraft appears to an observer on the planet to be shortened along the direction of motion.

- 37.10. IDENTIFY and SET UP:** When the meterstick is at rest with respect to you, you measure its length to be 1.000 m, and that is its proper length,  $l_0$ .  $l = 0.3048$  m.

**EXECUTE:**  $l = l_0 \sqrt{1 - u^2/c^2}$  gives  $u = c \sqrt{1 - (l/l_0)^2} = c \sqrt{1 - (0.3048/1.00)^2} = 0.9524c = 2.86 \times 10^8$  m/s.

- 37.11. IDENTIFY and SET UP:** The  $2.2 \mu\text{s}$  lifetime is  $\Delta t_0$  and the observer on earth measures  $\Delta t$ . The atmosphere is moving relative to the muon so in its frame the height of the atmosphere is  $l$  and  $l_0$  is 10 km.

**EXECUTE: (a)** The greatest speed the muon can have is  $c$ , so the greatest distance it can travel in  $2.2 \times 10^{-6}$  s is  $d = vt = (3.00 \times 10^8 \text{ m/s})(2.2 \times 10^{-6} \text{ s}) = 660 \text{ m} = 0.66 \text{ km}$ .

$$\text{(b) } \Delta t = \frac{\Delta t_0}{\sqrt{1 - u^2/c^2}} = \frac{2.2 \times 10^{-6} \text{ s}}{\sqrt{1 - (0.999)^2}} = 4.9 \times 10^{-5} \text{ s}$$

$$d = vt = (0.999)(3.00 \times 10^8 \text{ m/s})(4.9 \times 10^{-5} \text{ s}) = 15 \text{ km}$$

In the frame of the earth the muon can travel 15 km in the atmosphere during its lifetime.

$$\text{(c) } l = l_0 \sqrt{1 - u^2/c^2} = (10 \text{ km}) \sqrt{1 - (0.999)^2} = 0.45 \text{ km}$$

In the frame of the muon the height of the atmosphere is less than the distance it moves during its lifetime.

- 37.12. IDENTIFY and SET UP:** The scientist at rest on the earth's surface measures the proper length of the separation between the point where the particle is created and the surface of the earth, so  $l_0 = 45.0$  km.

The transit time measured in the particle's frame is the proper time,  $\Delta t_0$ .

$$\text{EXECUTE: (a) } t = \frac{l_0}{v} = \frac{45.0 \times 10^3 \text{ m}}{(0.99540)(3.00 \times 10^8 \text{ m/s})} = 1.51 \times 10^{-4} \text{ s}$$

$$\text{(b) } l = l_0 \sqrt{1 - u^2/c^2} = (45.0 \text{ km}) \sqrt{1 - (0.99540)^2} = 4.31 \text{ km}$$

$$\text{(c) time dilation formula: } \Delta t_0 = \Delta t \sqrt{1 - u^2/c^2} = (1.51 \times 10^{-4} \text{ s}) \sqrt{1 - (0.99540)^2} = 1.44 \times 10^{-5} \text{ s}$$

$$\text{from } \Delta l: t = \frac{l}{v} = \frac{4.31 \times 10^3 \text{ m}}{(0.99540)(3.00 \times 10^8 \text{ m/s})} = 1.44 \times 10^{-5} \text{ s}$$

The two results agree.

- 37.13. IDENTIFY:** Apply Eq. (37.16).

**SET UP:** The proper length  $l_0$  of the runway is its length measured in the earth's frame. The proper time  $\Delta t_0$  for the time interval for the spacecraft to travel from one end of the runway to the other is the time interval measured in the frame of the spacecraft.

**EXECUTE: (a)**  $l_0 = 3600$  m.

$$l = l_0 \sqrt{1 - \frac{u^2}{c^2}} = (3600 \text{ m}) \sqrt{1 - \frac{(4.00 \times 10^7 \text{ m/s})^2}{(3.00 \times 10^8 \text{ m/s})^2}} = (3600 \text{ m})(0.991) = 3568 \text{ m}.$$

$$\text{(b) } \Delta t = \frac{l_0}{u} = \frac{3600 \text{ m}}{4.00 \times 10^7 \text{ m/s}} = 9.00 \times 10^{-5} \text{ s}.$$

$$\text{(c) } \Delta t_0 = \frac{l}{u} = \frac{3568 \text{ m}}{4.00 \times 10^7 \text{ m/s}} = 8.92 \times 10^{-5} \text{ s}.$$

**EVALUATE:**  $\frac{1}{\gamma} = 0.991$ , so Eq. (37.8) gives  $\Delta t = \frac{8.92 \times 10^{-5} \text{ s}}{0.991} = 9.00 \times 10^{-5} \text{ s}$ . The result from length

contraction is consistent with the result from time dilation.

- 37.14. IDENTIFY:** The astronaut lies along the motion of the rocket, so his height will be Lorentz-contracted.

**SET UP:** The doctor in the rocket measures his proper length  $l_0$ .

**EXECUTE:** (a)  $l_0 = 2.00 \text{ m}$ .  $l = l_0 \sqrt{1 - u^2/c^2} = (2.00 \text{ m})\sqrt{1 - (0.850)^2} = 1.05 \text{ m}$ . The person on earth would measure his height to be 1.05 m.

(b)  $l = 2.00 \text{ m}$ .  $l_0 = \frac{l}{\sqrt{1 - u^2/c^2}} = \frac{2.00 \text{ m}}{\sqrt{1 - (0.850)^2}} = 3.80 \text{ m}$ . This is not a reasonable height for a human.

(c) There is no length contraction in a direction perpendicular to the motion and both observers measure the same height, 2.00 m.

**EVALUATE:** The length of an object moving with respect to the observer is shortened in the direction of the motion, so in (a) and (b) the observer on earth measures a shorter height.

**37.15. IDENTIFY:** Apply Eq. (37.23).

**SET UP:** The velocities  $\vec{v}'$  and  $\vec{v}$  are both in the  $+x$ -direction, so  $v'_x = v'$  and  $v_x = v$ .

**EXECUTE:** (a)  $v = \frac{v' + u}{1 + uv'/c^2} = \frac{0.400c + 0.600c}{1 + (0.400)(0.600)} = 0.806c$

(b)  $v = \frac{v' + u}{1 + uv'/c^2} = \frac{0.900c + 0.600c}{1 + (0.900)(0.600)} = 0.974c$

(c)  $v = \frac{v' + u}{1 + uv'/c^2} = \frac{0.990c + 0.600c}{1 + (0.990)(0.600)} = 0.997c$ .

**EVALUATE:** Speed  $v$  is always less than  $c$ , even when  $v' + u$  is greater than  $c$ .

**37.16. IDENTIFY:** Apply Eq. (37.6) and the equations for  $x$  and  $t$  that are developed in Example 37.6.

**SET UP:**  $S$  is Stanley's frame and  $S'$  is Mavis's frame. The proper time for the two events is the time interval measured in Mavis's frame.  $\gamma = 1.667$  ( $\gamma = 5/3$  if  $u = (4/5)c$ ).

**EXECUTE:** (a) In Mavis's frame the event "light on" has space-time coordinates  $x' = 0$  and  $t' = 5.00 \text{ s}$ , so from the result of Example 37.6,  $x = \gamma(x' + ut')$  and

$$t = \gamma\left(t' + \frac{ux'}{c^2}\right) \Rightarrow x = \gamma ut' = 2.00 \times 10^9 \text{ m}, t = \gamma t' = 8.33 \text{ s}.$$

(b) The 5.00-s interval in Mavis's frame is the proper time  $\Delta t_0$  in Eq. (37.6), so  $\Delta t = \gamma \Delta t_0 = 8.33 \text{ s}$ , the same as in part (a).

(c)  $(8.33 \text{ s})(0.800c) = 2.00 \times 10^9 \text{ m}$ , which is the distance  $x$  found in part (a).

**EVALUATE:** Mavis would measure that she would be a distance  $(5.00 \text{ s})(0.800c) = 1.20 \times 10^9 \text{ m}$  from Stanley when she turns on her light. In Eq. (37.16),  $l_0 = 2.00 \times 10^9 \text{ m}$  and  $l = 1.20 \times 10^9 \text{ m}$ .

**37.17. IDENTIFY:** The relativistic velocity addition formulas apply since the speeds are close to that of light.

**SET UP:** The relativistic velocity addition formula is  $v'_x = \frac{v_x - u}{1 - \frac{uv_x}{c^2}}$ .

**EXECUTE:** (a) For the pursuit ship to catch the cruiser, the distance between them must be decreasing, so the velocity of the cruiser relative to the pursuit ship must be directed toward the pursuit ship.

(b) Let the unprimed frame be Tatooine and let the primed frame be the pursuit ship. We want the velocity  $v'$  of the cruiser knowing the velocity of the primed frame  $u$  and the velocity of the cruiser  $v$  in the unprimed frame (Tatooine).

$$v'_x = \frac{v_x - u}{1 - \frac{uv_x}{c^2}} = \frac{0.600c - 0.800c}{1 - (0.600)(0.800)} = -0.385c$$

The result implies that the cruiser is moving toward the pursuit ship at  $0.385c$ .

**EVALUATE:** The nonrelativistic formula would have given  $-0.200c$ , which is considerably different from the correct result.

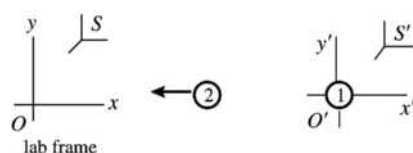
- 37.18. IDENTIFY:** The observer on the spaceship measures the speed of the missile relative to the ship, and the earth observer measures the speed of the rocketship relative to earth.

**SET UP:**  $u = 0.600c$ .  $v'_x = -0.800c$ .  $v_x = ?$ .  $v_x = \frac{v'_x + u}{1 + uv'_x/c^2}$ .

**EXECUTE:**  $v_x = \frac{v'_x + u}{1 + uv'_x/c^2} = \frac{-0.800c + 0.600c}{1 + (0.600)(-0.800)} = \frac{-0.200c}{0.520} = -0.385c$ . The speed of the missile in the earth frame is  $0.385c$ .

**EVALUATE:** The observers on earth and in the spaceship measure different speeds for the missile because they are moving relative to each other.

- 37.19. IDENTIFY and SET UP:** Reference frames  $S$  and  $S'$  are shown in Figure 37.19.



Frame  $S$  is at rest in the laboratory. Frame  $S'$  is attached to particle 1.

Figure 37.19

$u$  is the speed of  $S'$  relative to  $S$ ; this is the speed of particle 1 as measured in the laboratory. Thus  $u = +0.650c$ . The speed of particle 2 in  $S'$  is  $0.950c$ . Also, since the two particles move in opposite directions, 2 moves in the  $-x'$ -direction and  $v'_x = -0.950c$ . We want to calculate  $v_x$ , the speed of particle 2 in frame  $S$ ; use Eq. (37.23).

**EXECUTE:**  $v_x = \frac{v'_x + u}{1 + uv'_x/c^2} = \frac{-0.950c + 0.650c}{1 + (0.950c)(-0.650c)/c^2} = \frac{-0.300c}{1 - 0.6175} = -0.784c$ . The speed of the second particle, as measured in the laboratory, is  $0.784c$ .

**EVALUATE:** The incorrect Galilean expression for the relative velocity gives that the speed of the second particle in the lab frame is  $0.300c$ . The correct relativistic calculation gives a result more than twice this.

- 37.20. IDENTIFY and SET UP:** Let  $S$  be the laboratory frame and let  $S'$  be the frame of one of the particles, as shown in Figure 37.20. Let the positive  $x$ -direction for both frames be from particle 1 to particle 2. In the lab frame particle 1 is moving in the  $+x$ -direction and particle 2 is moving in the  $-x$ -direction. Then  $u = 0.9520c$  and  $v_x = -0.9520c$ .  $v'_x$  is the velocity of particle 2 relative to particle 1.

**EXECUTE:**  $v'_x = \frac{v_x - u}{1 - uv_x/c^2} = \frac{-0.9520c - 0.9520c}{1 - (0.9520c)(-0.9520c)/c^2} = -0.9988c$ . The speed of particle 2 relative to particle 1 is  $0.9988c$ .  $v'_x < 0$  shows particle 2 is moving toward particle 1.

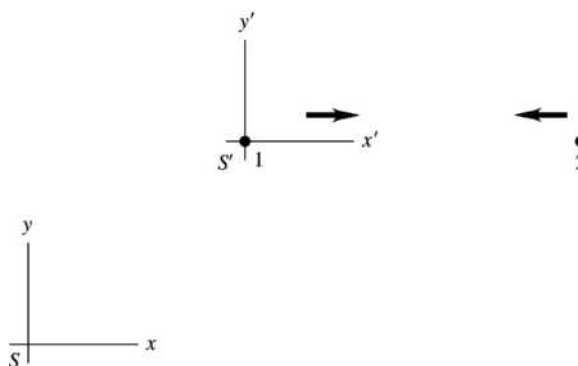


Figure 37.20

**37.21. IDENTIFY:** The relativistic velocity addition formulas apply since the speeds are close to that of light.

**SET UP:** The relativistic velocity addition formula is 
$$v'_x = \frac{v_x - u}{1 - \frac{uv_x}{c^2}}.$$

**EXECUTE:** In the relativistic velocity addition formula for this case,  $v'_x$  is the relative speed of particle 1 with respect to particle 2,  $v$  is the speed of particle 2 measured in the laboratory, and  $u$  is the speed of particle 1 measured in the laboratory,  $u = -v$ .

$$v'_x = \frac{v - (-v)}{1 - (-v)v/c^2} = \frac{2v}{1 + v^2/c^2}. \quad \frac{v'_x}{c^2}v^2 - 2v + v'_x = 0 \quad \text{and} \quad (0.890c)v^2 - 2c^2v + (0.890c^3) = 0.$$

This is a quadratic equation with solution  $v = 0.611c$  ( $v$  must be less than  $c$ ).

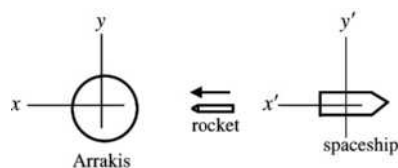
**EVALUATE:** The nonrelativistic result would be  $0.445c$ , which is considerably different from this result.

**37.22. IDENTIFY and SET UP:** Let the starfighter's frame be  $S$  and let the enemy spaceship's frame be  $S'$ . Let the positive  $x$ -direction for both frames be from the enemy spaceship toward the starfighter. Then  $u = +0.400c$ .  $v' = +0.700c$ .  $v$  is the velocity of the missile relative to you.

**EXECUTE: (a)** 
$$v = \frac{v' + u}{1 + uv'/c^2} = \frac{0.700c + 0.400c}{1 + (0.400)(0.700)} = 0.859c$$

**(b)** Use the distance it moves as measured in your frame and the speed it has in your frame to calculate the time it takes in your frame. 
$$t = \frac{8.00 \times 10^9 \text{ m}}{(0.859)(3.00 \times 10^8 \text{ m/s})} = 31.0 \text{ s}.$$

**37.23. IDENTIFY and SET UP:** The reference frames are shown in Figure 37.23.



$S$  = Arrakis frame  
 $S'$  = spaceship frame  
 The object is the rocket.

**Figure 37.23**

$u$  is the velocity of the spaceship relative to Arrakis.

$$v_x = +0.360c; v'_x = +0.920c$$

(In each frame the rocket is moving in the positive coordinate direction.)

Use the Lorentz velocity transformation equation, Eq. (37.22): 
$$v'_x = \frac{v_x - u}{1 - uv_x/c^2}.$$

**EXECUTE:** 
$$v'_x = \frac{v_x - u}{1 - uv_x/c^2} \quad \text{so} \quad v'_x - u \left( \frac{v_x v'_x}{c^2} \right) = v_x - u \quad \text{and} \quad u \left( 1 - \frac{v_x v'_x}{c^2} \right) = v_x - v'_x$$

$$u = \frac{v_x - v'_x}{1 - v_x v'_x/c^2} = \frac{0.360c - 0.920c}{1 - (0.360c)(0.920c)/c^2} = -\frac{0.560c}{0.6688} = -0.837c$$

The speed of the spacecraft relative to Arrakis is  $0.837c = 2.51 \times 10^8 \text{ m/s}$ . The minus sign in our result for  $u$  means that the spacecraft is moving in the  $-x$ -direction, so it is moving away from Arrakis.

**EVALUATE:** The incorrect Galilean expression also says that the spacecraft is moving away from Arrakis, but with speed  $0.920c - 0.360c = 0.560c$ .

**37.24. IDENTIFY:** There is a Doppler effect in the frequency of the radiation due to the motion of the star.

**SET UP:** The star is moving away from the earth, so 
$$f = \sqrt{\frac{c - u}{c + u}} f_0.$$

**EXECUTE:** 
$$f = \sqrt{\frac{c - 0.600c}{c + 0.600c}} f_0 = 0.500 f_0 = (0.500)(8.64 \times 10^{14} \text{ Hz}) = 4.32 \times 10^{14} \text{ Hz}.$$

**EVALUATE:** The earth observer measures a lower frequency than the star emits because the star is moving away from the earth.

- 37.25. IDENTIFY and SET UP:** Source and observer are approaching, so use Eq. (37.25):  $f = \sqrt{\frac{c+u}{c-u}} f_0$ . Solve for  $u$ , the speed of the light source relative to the observer.

**(a) EXECUTE:**  $f^2 = \left(\frac{c+u}{c-u}\right) f_0^2$

$$(c-u)f^2 = (c+u)f_0^2 \text{ and } u = \frac{c(f^2 - f_0^2)}{f^2 + f_0^2} = c \left( \frac{(ff_0)^2 - 1}{(ff_0)^2 + 1} \right)$$

$$\lambda_0 = 675 \text{ nm}, \lambda = 575 \text{ nm}$$

$$u = \left( \frac{(675 \text{ nm}/575 \text{ nm})^2 - 1}{(675 \text{ nm}/575 \text{ nm})^2 + 1} \right) c = 0.159c = (0.159)(2.998 \times 10^8 \text{ m/s}) = 4.77 \times 10^7 \text{ m/s}; \text{ definitely speeding}$$

- (b)**  $4.77 \times 10^7 \text{ m/s} = (4.77 \times 10^7 \text{ m/s})(1 \text{ km}/1000 \text{ m})(3600 \text{ s}/1 \text{ h}) = 1.72 \times 10^8 \text{ km/h}$ . Your fine would be  $\$1.72 \times 10^8$  (172 million dollars).

**EVALUATE:** The source and observer are approaching, so  $f > f_0$  and  $\lambda < \lambda_0$ . Our result gives  $u < c$ , as it must.

- 37.26. IDENTIFY:** There is a Doppler effect in the frequency of the radiation due to the motion of the source.

**SET UP:**  $f > f_0$  so the source is moving toward you.  $f = \sqrt{\frac{c+u}{c-u}} f_0$ .

**EXECUTE:**  $(ff_0)^2 = \frac{c+u}{c-u}$ .  $c(ff_0)^2 - (ff_0)^2 u = c + u$ .

$$u = \frac{c[(ff_0)^2 - 1]}{(ff_0)^2 + 1} = \left[ \frac{(1.25)^2 - 1}{(1.25)^2 + 1} \right] c = 0.220c, \text{ toward you.}$$

**EVALUATE:** The difference in frequency is rather large (1.25 times), so the motion of the source must be a substantial fraction of the speed of light (around 20% in this case).

- 37.27. IDENTIFY:** The speed of the proton is a substantial fraction of the speed of light, so we must use the relativistic formula for momentum.

**SET UP:**  $p = \gamma mv$ .  $p_0 = \gamma_0 m v_0$ .  $\frac{p}{p_0} = \frac{\gamma v}{\gamma_0 v_0}$ .  $v/v_0 = 2.00$ .

**EXECUTE:**  $\gamma_0 = \frac{1}{\sqrt{1 - v_0^2/c^2}} = \frac{1}{\sqrt{1 - (0.400)^2}} = 1.0911$ .  $\gamma = \frac{1}{\sqrt{1 - (0.800)^2}} = 1.667$ .

$$p = p_0(2) \left( \frac{1.667}{1.091} \right) = 3.06 p_0.$$

**EVALUATE:** The speed doubles but the momentum more than triples.

- 37.28. IDENTIFY and SET UP:**  $\gamma = \frac{1}{\sqrt{1 - v^2/c^2}}$ . If  $\gamma$  is 1.0% greater than 1 then  $\gamma = 1.010$ , if  $\gamma$  is 10% greater than 1 then  $\gamma = 1.10$  and if  $\gamma$  is 100% greater than 1 then  $\gamma = 2.00$ .

**EXECUTE:**  $v = c\sqrt{1 - 1/\gamma^2}$

**(a)**  $v = c\sqrt{1 - 1/(1.010)^2} = 0.140c$

**(b)**  $v = c\sqrt{1 - 1/(1.10)^2} = 0.417c$

**(c)**  $v = c\sqrt{1 - 1/(2.00)^2} = 0.866c$

**37.29. IDENTIFY:** Apply Eqs. (37.27) and (37.32).

**SET UP:** For a particle at rest (or with  $v \ll c$ ),  $a = F/m$ .

**EXECUTE:** (a)  $p = \frac{mv}{\sqrt{1-v^2/c^2}} = 2mv$ .

$$\Rightarrow 1 = 2\sqrt{1-v^2/c^2} \Rightarrow \frac{1}{4} = 1 - \frac{v^2}{c^2} \Rightarrow v^2 = \frac{3}{4}c^2 \Rightarrow v = \frac{\sqrt{3}}{2}c = 0.866c.$$

(b)  $F = \gamma^3 ma = 2ma \Rightarrow \gamma^3 = 2 \Rightarrow \gamma = (2)^{1/3}$  so  $\frac{1}{1-v^2/c^2} = 2^{2/3} \Rightarrow \frac{v}{c} = \sqrt{1-2^{-2/3}} = 0.608$ .

**EVALUATE:** The momentum of a particle and the force required to give it a given acceleration both increase without bound as the speed of the particle approaches  $c$ .

**37.30. IDENTIFY:** The speed of the proton is a substantial fraction of the speed of light, so we must use the relativistic form of Newton's second law.

**SET UP:**  $\vec{F}$  and  $\vec{v}$  are along the same line, so  $F = \frac{ma}{(1-v^2/c^2)^{3/2}}$ .

**EXECUTE:** (a)  $F = \frac{ma}{(1-v^2/c^2)^{3/2}} = \frac{(1.67 \times 10^{-27} \text{ kg})(2.30 \times 10^8 \text{ m/s}^2)}{[1 - (2.30 \times 10^8 / 3.00 \times 10^8)^2]^{3/2}} = 1.45 \times 10^{-18} \text{ N}$ ;  $-x$ -direction.

(b)  $a = \frac{F}{m} = \frac{1.45 \times 10^{-18} \text{ N}}{1.67 \times 10^{-27} \text{ kg}} = 8.69 \times 10^8 \text{ m/s}^2$ .

**EVALUATE:** The acceleration in part (b) is much greater than the acceleration given in the problem because the proton starting at rest is not relativistic.

**37.31. IDENTIFY:** When the speed of the electron is close to the speed of light, we must use the relativistic form of Newton's second law.

**SET UP:** When the force and velocity are parallel, as in part (b),  $F = \frac{ma}{(1-v^2/c^2)^{3/2}}$ . In part (a),  $v \ll c$

so  $F = ma$ .

**EXECUTE:** (a)  $a = \frac{F}{m} = \frac{5.00 \times 10^{-15} \text{ N}}{9.11 \times 10^{-31} \text{ kg}} = 5.49 \times 10^{15} \text{ m/s}^2$ .

(b)  $\gamma = \frac{1}{(1-v^2/c^2)^{1/2}} = \frac{1}{(1 - [2.50 \times 10^8 / 3.00 \times 10^8]^2)^{1/2}} = 1.81$ .

$a = \frac{F}{m\gamma^3} = \frac{5.49 \times 10^{15} \text{ m/s}^2}{(1.81)^3} = 9.26 \times 10^{14} \text{ m/s}^2$ .

**EVALUATE:** The acceleration for low speeds is over 5 times greater than it is near the speed of light as in part (b).

**37.32. IDENTIFY and SET UP:** The force is found from Eq. (37.32) or Eq. (37.33).

**EXECUTE:** (a) Indistinguishable from  $F = ma = 0.145 \text{ N}$ .

(b)  $\gamma^3 ma = 1.75 \text{ N}$ .

(c)  $\gamma^3 ma = 51.7 \text{ N}$ .

(d)  $\gamma ma = 0.145 \text{ N}$ ,  $0.333 \text{ N}$ ,  $1.03 \text{ N}$ .

**EVALUATE:** When  $v$  is large, much more force is required to produce a given magnitude of acceleration when the force is parallel to the velocity than when the force is perpendicular to the velocity.

**37.33. IDENTIFY:** Apply Eq. (37.36).

**SET UP:** The rest energy is  $mc^2$ .

**EXECUTE:** (a)  $K = \frac{mc^2}{\sqrt{1-v^2/c^2}} - mc^2 = mc^2$

$$\Rightarrow \frac{1}{\sqrt{1-v^2/c^2}} = 2 \Rightarrow \frac{1}{4} = 1 - \frac{v^2}{c^2} \Rightarrow v = \frac{\sqrt{3}}{2}c = 0.866c.$$



$$(b) K = 5mc^2 \Rightarrow \frac{1}{\sqrt{1-v^2/c^2}} = 6 \Rightarrow \frac{1}{36} = 1 - \frac{v^2}{c^2} \Rightarrow v = \sqrt{\frac{35}{36}}c = 0.986c.$$

**EVALUATE:** If  $v \ll c$ , then  $K$  is much less than the rest energy of the particle.

**37.34. IDENTIFY:** At such a high speed, we must use the relativistic formulas for momentum and kinetic energy.

**SET UP:**  $m_\mu = 207m_e = 1.89 \times 10^{-28}$  kg.  $v$  is very close to  $c$  and we must use relativistic expressions.

$$p = \frac{mv}{\sqrt{1-v^2/c^2}}, \quad K = \frac{mc^2}{\sqrt{1-v^2/c^2}} - mc^2.$$

$$\text{EXECUTE: } p = \frac{mv}{\sqrt{1-v^2/c^2}} = \frac{(1.89 \times 10^{-28} \text{ kg})(0.999)(3.00 \times 10^8 \text{ m/s})}{\sqrt{1-(0.999)^2}} = 1.27 \times 10^{-18} \text{ kg} \cdot \text{m/s}.$$

$$\text{Using } K = \frac{mc^2}{\sqrt{1-v^2/c^2}} - mc^2 \text{ gives}$$

$$K = (1.89 \times 10^{-28} \text{ kg})(3.00 \times 10^8 \text{ m/s})^2 \left( \frac{1}{\sqrt{1-(0.999)^2}} - 1 \right) = 3.63 \times 10^{-10} \text{ J}.$$

**EVALUATE:** The nonrelativistic values are  $p_{nr} = mv = 5.66 \times 10^{-20}$  kg · m/s and

$$K_{nr} = \frac{1}{2}mv^2 = 8.49 \times 10^{-12} \text{ J}. \text{ Each relativistic result is much larger.}$$

**37.35. IDENTIFY and SET UP:** Use Eqs. (37.38) and (37.39).

**EXECUTE: (a)**  $E = mc^2 + K$ , so  $E = 4.00mc^2$  means  $K = 3.00mc^2 = 4.50 \times 10^{-10}$  J

$$(b) E^2 = (mc^2)^2 + (pc)^2; E = 4.00mc^2, \text{ so } 15.0(mc^2)^2 = (pc)^2$$

$$p = \sqrt{15}mc = 1.94 \times 10^{-18} \text{ kg} \cdot \text{m/s}$$

$$(c) E = mc^2 / \sqrt{1-v^2/c^2}$$

$$E = 4.00mc^2 \text{ gives } 1 - v^2/c^2 = 1/16 \text{ and } v = \sqrt{15/16}c = 0.968c$$

**EVALUATE:** The speed is close to  $c$  since the kinetic energy is greater than the rest energy. Nonrelativistic expressions relating  $E$ ,  $K$ ,  $p$  and  $v$  will be very inaccurate.

**37.36. IDENTIFY:** Apply the work energy theorem in the form  $W = \Delta K$ .

**SET UP:**  $K$  is given by Eq. (37.36). When  $v = 0$ ,  $\gamma = 1$ .

$$\text{EXECUTE: (a)} W = \Delta K = (\gamma_f - 1)mc^2 = (4.07 \times 10^{-3})mc^2.$$

$$(b) (\gamma_f - \gamma_i)mc^2 = 4.79mc^2.$$

(c) The result of part (b) is far larger than that of part (a).

**EVALUATE:** The amount of work required to produce a given increase in speed (in this case an increase of 0.090c) increases as the initial speed increases.

**37.37. IDENTIFY:** Use  $E = mc^2$  to relate the mass increase to the energy increase.

(a) **SET UP:** Your total energy  $E$  increases because your gravitational potential energy  $mg\Delta y$  increases.

**EXECUTE:**  $\Delta E = mg\Delta y$

$$\Delta E = (\Delta m)c^2 \text{ so } \Delta m = \Delta E/c^2 = mg(\Delta y)/c^2$$

$$\Delta m/m = (g\Delta y)/c^2 = (9.80 \text{ m/s}^2)(30 \text{ m})/(2.998 \times 10^8 \text{ m/s})^2 = 3.3 \times 10^{-13}\%$$

This increase is much, much too small to be noticed.

(b) **SET UP:** The energy increases because potential energy is stored in the compressed spring.

$$\text{EXECUTE: } \Delta E = \Delta U = \frac{1}{2}kx^2 = \frac{1}{2}(2.00 \times 10^4 \text{ N/m})(0.060 \text{ m})^2 = 36.0 \text{ J}$$

$$\Delta m = (\Delta E)/c^2 = 4.0 \times 10^{-16} \text{ kg}$$

Energy increases so mass increases. The mass increase is much, much too small to be noticed.

**EVALUATE:** In both cases the energy increase corresponds to a mass increase. But since  $c^2$  is a very large number the mass increase is very small.

**37.38. IDENTIFY:** Apply Eq. (37.38).

**SET UP:** When the person is at rest her total energy is  $E_0 = mc^2$ .

**EXECUTE:** (a)  $E = 2mc^2$ , so  $\frac{1}{\sqrt{1-v^2/c^2}} = 2$ .

$$\frac{1}{4} = 1 - \frac{v^2}{c^2} \Rightarrow \frac{v^2}{c^2} = \frac{3}{4} \Rightarrow v = c\sqrt{3/4} = 0.866c = 2.60 \times 10^8 \text{ m/s}$$

(b)  $E = 10mc^2$ , so  $\frac{1}{\sqrt{1-v^2/c^2}} = 10$ .  $1 - \frac{v^2}{c^2} = \frac{1}{100} \Rightarrow \frac{v^2}{c^2} = \frac{99}{100}$ .  $v = c\sqrt{\frac{99}{100}} = 0.995c = 2.98 \times 10^8 \text{ m/s}$ .

**EVALUATE:** Unless  $v$  approaches  $c$ , the total energy of an object is not much greater than its rest energy.

**37.39. IDENTIFY and SET UP:** The energy equivalent of mass is  $E = mc^2$ .  $\rho = 7.86 \text{ g/cm}^3 = 7.86 \times 10^3 \text{ kg/m}^3$ .

For a cube,  $V = L^3$ .

**EXECUTE:** (a)  $m = \frac{E}{c^2} = \frac{1.0 \times 10^{20} \text{ J}}{(3.00 \times 10^8 \text{ m/s})^2} = 1.11 \times 10^3 \text{ kg}$

(b)  $\rho = \frac{m}{V}$  so  $V = \frac{m}{\rho} = \frac{1.11 \times 10^3 \text{ kg}}{7.86 \times 10^3 \text{ kg/m}^3} = 0.141 \text{ m}^3$ .  $L = V^{1/3} = 0.521 \text{ m} = 52.1 \text{ cm}$

**EVALUATE:** Particle/antiparticle annihilation has been observed in the laboratory, but only with small quantities of antimatter.

**37.40. IDENTIFY:** With such a large potential difference, the electrons will be accelerated to relativistic speeds, so we must use the relativistic formula for kinetic energy.

**SET UP:**  $K = \left( \frac{1}{\sqrt{1-v^2/c^2}} - 1 \right) mc^2$ . The classical expression for kinetic energy is  $K = \frac{1}{2}mv^2$ .

**EXECUTE:** For an electron  $mc^2 = (9.11 \times 10^{-31} \text{ kg})(3.00 \times 10^8 \text{ m/s})^2 = 8.20 \times 10^{-14} \text{ J}$ .

$$K = 7.50 \times 10^5 \text{ eV} = 1.20 \times 10^{-13} \text{ J}.$$

(a)  $\frac{K}{mc^2} + 1 = \frac{1}{\sqrt{1-v^2/c^2}}$ .  $\frac{1}{\sqrt{1-v^2/c^2}} = \frac{1.20 \times 10^{-13} \text{ J}}{8.20 \times 10^{-14} \text{ J}} + 1 = 2.46$ .

$$v = c\sqrt{1 - (1/2.46)^2} = 0.914c = 2.74 \times 10^8 \text{ m/s}.$$

(b)  $K = \frac{1}{2}mv^2$  gives  $v = \sqrt{\frac{2K}{m}} = \sqrt{\frac{2(1.20 \times 10^{-13} \text{ J})}{9.11 \times 10^{-31} \text{ kg}}} = 5.13 \times 10^8 \text{ m/s}$ .

**EVALUATE:** At a given speed the relativistic value of the kinetic energy is larger than the nonrelativistic value. Therefore, for a given kinetic energy the relativistic expression for kinetic energy gives a smaller speed than the nonrelativistic expression.

**37.41. IDENTIFY and SET UP:** The total energy is given in terms of the momentum by Eq. (37.39). In terms of the total energy  $E$ , the kinetic energy  $K$  is  $K = E - mc^2$  (from Eq. 37.38). The rest energy is  $mc^2$ .

**EXECUTE:** (a)  $E = \sqrt{(mc^2)^2 + (pc)^2} = \sqrt{[(6.64 \times 10^{-27})(2.998 \times 10^8)^2]^2 + [(2.10 \times 10^{-18})(2.998 \times 10^8)]^2} \text{ J}$   
 $E = 8.67 \times 10^{-10} \text{ J}$

(b)  $mc^2 = (6.64 \times 10^{-27} \text{ kg})(2.998 \times 10^8 \text{ m/s})^2 = 5.97 \times 10^{-10} \text{ J}$

$$K = E - mc^2 = 8.67 \times 10^{-10} \text{ J} - 5.97 \times 10^{-10} \text{ J} = 2.70 \times 10^{-10} \text{ J}$$

(c)  $\frac{K}{mc^2} = \frac{2.70 \times 10^{-10} \text{ J}}{5.97 \times 10^{-10} \text{ J}} = 0.452$

**EVALUATE:** The incorrect nonrelativistic expressions for  $K$  and  $p$  give  $K = p^2/2m = 3.3 \times 10^{-10}$  J; the correct relativistic value is less than this.

**37.42. IDENTIFY:** Since the final speed is close to the speed of light, there will be a considerable difference between the relativistic and nonrelativistic results.

**SET UP:** The nonrelativistic work-energy theorem is  $F\Delta x = \frac{1}{2}mv^2 - \frac{1}{2}mv_0^2$ , and the relativistic formula for a constant force is  $F\Delta x = (\gamma - 1)mc^2$ .

**EXECUTE: (a)** Using the classical work-energy theorem and solving for  $\Delta x$ , we obtain

$$\Delta x = \frac{m(v^2 - v_0^2)}{2F} = \frac{(0.100 \times 10^{-9} \text{ kg})[(0.900)(3.00 \times 10^8 \text{ m/s})]^2}{2(1.00 \times 10^6 \text{ N})} = 3.65 \text{ m}.$$

**(b)** Using the relativistic work-energy theorem for a constant force, we obtain

$$\Delta x = \frac{(\gamma - 1)mc^2}{F}.$$

For the given speed,  $\gamma = \frac{1}{\sqrt{1 - 0.900^2}} = 2.29$ , thus

$$\Delta x = \frac{(2.29 - 1)(0.100 \times 10^{-9} \text{ kg})(3.00 \times 10^8 \text{ m/s})^2}{(1.00 \times 10^6 \text{ N})} = 11.6 \text{ m}.$$

**EVALUATE: (c)** The distance obtained from the relativistic treatment is greater. As we have seen, more energy is required to accelerate an object to speeds close to  $c$ , so that force must act over a greater distance.

**37.43. IDENTIFY and SET UP:** The nonrelativistic expression is  $K_{\text{nonrel}} = \frac{1}{2}mv^2$  and the relativistic expression is

$$K_{\text{rel}} = (\gamma - 1)mc^2.$$

**EXECUTE: (a)**  $v = 8 \times 10^7 \text{ m/s} \Rightarrow \gamma = \frac{1}{\sqrt{1 - v^2/c^2}} = 1.0376$ . For  $m = m_p$ ,  $K_{\text{nonrel}} = \frac{1}{2}mv^2 = 5.34 \times 10^{-12} \text{ J}$ .

$$K_{\text{rel}} = (\gamma - 1)mc^2 = 5.65 \times 10^{-12} \text{ J}. \quad \frac{K_{\text{rel}}}{K_{\text{nonrel}}} = 1.06.$$

**(b)**  $v = 2.85 \times 10^8 \text{ m/s}$ ;  $\gamma = 3.203$ .

$$K_{\text{nonrel}} = \frac{1}{2}mv^2 = 6.78 \times 10^{-11} \text{ J}; \quad K_{\text{rel}} = (\gamma - 1)mc^2 = 3.31 \times 10^{-10} \text{ J}; \quad K_{\text{rel}}/K_{\text{nonrel}} = 4.88.$$

**EVALUATE:**  $K_{\text{rel}}/K_{\text{nonrel}}$  increases without bound as  $v$  approaches  $c$ .

**37.44. IDENTIFY:** Since the speeds involved are close to that of light, we must use the relativistic formula for kinetic energy.

**SET UP:** The relativistic kinetic energy is  $K = (\gamma - 1)mc^2 = \left( \frac{1}{\sqrt{1 - v^2/c^2}} - 1 \right) mc^2$ .

**EXECUTE: (a)**

$$K = (\gamma - 1)mc^2 = \left( \frac{1}{\sqrt{1 - v^2/c^2}} - 1 \right) mc^2 = (1.67 \times 10^{-27} \text{ kg})(3.00 \times 10^8 \text{ m/s})^2 \left( \frac{1}{\sqrt{1 - (0.100c/c)^2}} - 1 \right)$$

$$K = (1.50 \times 10^{-10} \text{ J}) \left( \frac{1}{\sqrt{1 - 0.0100}} - 1 \right) = 7.56 \times 10^{-13} \text{ J} = 4.73 \text{ MeV}$$

$$\text{(b)} \quad K = (1.50 \times 10^{-10} \text{ J}) \left( \frac{1}{\sqrt{1 - (0.500)^2}} - 1 \right) = 2.32 \times 10^{-11} \text{ J} = 145 \text{ MeV}$$

$$\text{(c)} \quad K = (1.50 \times 10^{-10} \text{ J}) \left( \frac{1}{\sqrt{1 - (0.900)^2}} - 1 \right) = 1.94 \times 10^{-10} \text{ J} = 1210 \text{ MeV}$$

(d)  $\Delta E = 2.32 \times 10^{-11} \text{ J} - 7.56 \times 10^{-13} \text{ J} = 2.24 \times 10^{-11} \text{ J} = 140 \text{ MeV}$

(e)  $\Delta E = 1.94 \times 10^{-10} \text{ J} - 2.32 \times 10^{-11} \text{ J} = 1.71 \times 10^{-10} \text{ J} = 1070 \text{ MeV}$

(f) Without relativity,  $K = \frac{1}{2}mv^2$ . The work done in accelerating a proton from  $0.100c$  to  $0.500c$  in the

nonrelativistic limit is  $\Delta E = \frac{1}{2}m(0.500c)^2 - \frac{1}{2}m(0.100c)^2 = 1.81 \times 10^{-11} \text{ J} = 113 \text{ MeV}$ .

The work done in accelerating a proton from  $0.500c$  to  $0.900c$  in the nonrelativistic limit is

$$\Delta E = \frac{1}{2}m(0.900c)^2 - \frac{1}{2}m(0.500c)^2 = 4.21 \times 10^{-11} \text{ J} = 263 \text{ MeV}.$$

**EVALUATE:** We see in the first case the nonrelativistic result is within 20% of the relativistic result. In the second case, the nonrelativistic result is very different from the relativistic result since the velocities are closer to  $c$ .

**37.45. IDENTIFY and SET UP:** Use Eq. (23.12) and conservation of energy to relate the potential difference to the kinetic energy gained by the electron. Use Eq. (37.36) to calculate the kinetic energy from the speed.

**EXECUTE:** (a)  $K = q\Delta V = e\Delta V$

$$K = mc^2 \left( \frac{1}{\sqrt{1-v^2/c^2}} - 1 \right) = 4.025mc^2 = 3.295 \times 10^{-13} \text{ J} = 2.06 \text{ MeV}$$

$$\Delta V = K/e = 2.06 \times 10^6 \text{ V}$$

(b) From part (a),  $K = 3.30 \times 10^{-13} \text{ J} = 2.06 \text{ MeV}$

**EVALUATE:** The speed is close to  $c$  and the kinetic energy is four times the rest mass.

**37.46. IDENTIFY:** The total energy is conserved in the collision.

**SET UP:** Use Eq. (37.38) for the total energy. Since all three particles are at rest after the collision, the final total energy is  $2Mc^2 + mc^2$ . The initial total energy of the two protons is  $\gamma 2Mc^2$ .

**EXECUTE:** (a)  $2Mc^2 + mc^2 = \gamma 2Mc^2 \Rightarrow \gamma = 1 + \frac{m}{2M} = 1 + \frac{9.75}{2(16.7)} = 1.292$ .

Note that since  $\gamma = \frac{1}{\sqrt{1-v^2/c^2}}$ , we have that  $\frac{v}{c} = \sqrt{1 - \frac{1}{\gamma^2}} = \sqrt{1 - \frac{1}{(1.292)^2}} = 0.6331$ .

(b) According to Eq. (37.36), the kinetic energy of each proton is

$$K = (\gamma - 1)Mc^2 = (1.292 - 1)(1.67 \times 10^{-27} \text{ kg})(3.00 \times 10^8 \text{ m/s})^2 \left( \frac{1.00 \text{ MeV}}{1.60 \times 10^{-13} \text{ J}} \right) = 274 \text{ MeV}.$$

(c) The rest energy of  $\eta^0$  is  $mc^2 = (9.75 \times 10^{-28} \text{ kg})(3.00 \times 10^8 \text{ m/s})^2 \left( \frac{1.00 \text{ MeV}}{1.60 \times 10^{-13} \text{ J}} \right) = 548 \text{ MeV}$ .

**EVALUATE:** (d) The kinetic energy lost by the protons is the energy that produces the  $\eta^0$ ,  $548 \text{ MeV} = 2(274 \text{ MeV})$ .

**37.47. IDENTIFY:** Use  $E = mc^2$  to relate the mass decrease to the energy produced.

**SET UP:** 1 kg is equivalent to 2.2 lbs and 1 ton = 2000 lbs. 1 W = 1 J/s.

**EXECUTE:** (a)  $E = mc^2$ ,  $m = E/c^2 = (3.8 \times 10^{26} \text{ J})/(2.998 \times 10^8 \text{ m/s})^2 = 4.2 \times 10^9 \text{ kg} = 4.6 \times 10^6 \text{ tons}$ .

(b) The current mass of the sun is  $1.99 \times 10^{30} \text{ kg}$ , so it would take it

$$(1.99 \times 10^{30} \text{ kg})/(4.2 \times 10^9 \text{ kg/s}) = 4.7 \times 10^{20} \text{ s} = 1.5 \times 10^{13} \text{ years}$$
 to use up all its mass.

**EVALUATE:** The power output of the sun is very large, but only a small fraction of the sun's mass is converted to energy each second.

**37.48. IDENTIFY and SET UP:** The astronaut in the spaceship measures the proper time, since the end of a swing

occurs at the same location in his frame.  $\Delta t = \frac{\Delta t_0}{\sqrt{1-u^2/c^2}}$ .

**EXECUTE:** (a)  $\Delta t_0 = 1.50 \text{ s}$ .  $\Delta t = \frac{\Delta t_0}{\sqrt{1-u^2/c^2}} = \frac{1.50 \text{ s}}{\sqrt{1-(0.75c/c)^2}} = 2.27 \text{ s}$ .

(b)  $\Delta t = 1.50 \text{ s}$ .  $\Delta t_0 = \Delta t \sqrt{1-u^2/c^2} = (1.50 \text{ s}) \sqrt{1-(0.75c/c)^2} = 0.992 \text{ s}$ .

**EVALUATE:** The motion of the spaceship makes a considerable difference in the measured values for the period of the pendulum!

- 37.49. (a) IDENTIFY and SET UP:**  $\Delta t_0 = 2.60 \times 10^{-8} \text{ s}$  is the proper time, measured in the pion's frame. The time measured in the lab must satisfy  $d = c\Delta t$ , where  $u \approx c$ . Calculate  $\Delta t$  and then use Eq. (37.6) to calculate  $u$ .

**EXECUTE:**  $\Delta t = \frac{d}{c} = \frac{1.90 \times 10^3 \text{ m}}{2.998 \times 10^8 \text{ m/s}} = 6.3376 \times 10^{-6} \text{ s}$ .  $\Delta t = \frac{\Delta t_0}{\sqrt{1-u^2/c^2}}$  so  $(1-u^2/c^2)^{1/2} = \frac{\Delta t_0}{\Delta t}$  and

$(1-u^2/c^2) = \left(\frac{\Delta t_0}{\Delta t}\right)^2$ . Write  $u = (1-\Delta)c$  so that  $(u/c)^2 = (1-\Delta)^2 = 1-2\Delta+\Delta^2 \approx 1-2\Delta$  since  $\Delta$  is small.

Using this in the above gives  $1-(1-2\Delta) = \left(\frac{\Delta t_0}{\Delta t}\right)^2$ .  $\Delta = \frac{1}{2} \left(\frac{\Delta t_0}{\Delta t}\right)^2 = \frac{1}{2} \left(\frac{2.60 \times 10^{-8} \text{ s}}{6.3376 \times 10^{-6} \text{ s}}\right)^2 = 8.42 \times 10^{-6}$ .

**EVALUATE:** An alternative calculation is to say that the length of the tube must contract relative to the moving pion so that the pion travels that length before decaying. The contracted length must be

$l = c\Delta t_0 = (2.998 \times 10^8 \text{ m/s})(2.60 \times 10^{-8} \text{ s}) = 7.7948 \text{ m}$ .  $l = l_0 \sqrt{1-u^2/c^2}$  so  $1-u^2/c^2 = \left(\frac{l}{l_0}\right)^2$ . Then

$u = (1-\Delta)c$  gives  $\Delta = \frac{1}{2} \left(\frac{l}{l_0}\right)^2 = \frac{1}{2} \left(\frac{7.7948 \text{ m}}{1.90 \times 10^3 \text{ m}}\right)^2 = 8.42 \times 10^{-6}$ , which checks.

- (b) **IDENTIFY and SET UP:**  $E = \gamma mc^2$  Eq. (37.38).

**EXECUTE:**  $\gamma = \frac{1}{\sqrt{1-u^2/c^2}} = \frac{1}{\sqrt{2\Delta}} = \frac{1}{\sqrt{2(8.42 \times 10^{-6})}} = 244$ .

$E = (244)(139.6 \text{ MeV}) = 3.40 \times 10^4 \text{ MeV} = 34.0 \text{ GeV}$ .

**EVALUATE:** The total energy is 244 times the rest energy.

- 37.50. IDENTIFY and SET UP:** The proper length of a side is  $l_0 = a$ . The side along the direction of motion is

shortened to  $l = l_0 \sqrt{1-v^2/c^2}$ . The sides in the two directions perpendicular to the motion are unaffected by the motion and still have a length  $a$ .

**EXECUTE:**  $V = a^2 l = a^3 \sqrt{1-v^2/c^2}$

- 37.51. IDENTIFY and SET UP:** There must be a length contraction such that the length  $a$  becomes the same as  $b$ ;  $l_0 = a$ ,  $l = b$ .  $l_0$  is the distance measured by an observer at rest relative to the spacecraft. Use Eq. (37.16) and solve for  $u$ .

**EXECUTE:**  $\frac{l}{l_0} = \sqrt{1-u^2/c^2}$  so  $\frac{b}{a} = \sqrt{1-u^2/c^2}$ ;

$a = 1.40b$  gives  $b/1.40b = \sqrt{1-u^2/c^2}$  and thus  $1-u^2/c^2 = 1/(1.40)^2$

$u = \sqrt{1-1/(1.40)^2} c = 0.700c = 2.10 \times 10^8 \text{ m/s}$

**EVALUATE:** A length on the spacecraft in the direction of the motion is shortened. A length perpendicular to the motion is unchanged.

- 37.52. IDENTIFY and SET UP:** The proper time  $\Delta t_0$  is the time that elapses in the frame of the space probe.  $\Delta t$  is the time that elapses in the frame of the earth. The distance traveled is 42.2 light years, as measured in the earth frame.

**EXECUTE:** Light travels 42.2 light years in 42.2 y, so  $\Delta t = \left(\frac{c}{0.9930c}\right)(42.2 \text{ y}) = 42.5 \text{ y}$ .

$\Delta t_0 = \Delta t \sqrt{1 - u^2/c^2} = (42.5 \text{ y}) \sqrt{1 - (0.9930)^2} = 5.0 \text{ y}$ . She measures her biological age to be  $19 \text{ y} + 5.0 \text{ y} = 24.0 \text{ y}$ .

**EVALUATE:** Her age measured by someone on earth is  $19 \text{ y} + 42.5 \text{ y} = 61.5 \text{ y}$ .

**37.53. IDENTIFY and SET UP:** The total energy  $E$  is related to the rest mass  $mc^2$  by  $E = \gamma mc^2$ .

**EXECUTE:** (a)  $E = \gamma mc^2$ , so  $\gamma = 10 = \frac{1}{\sqrt{1 - (v/c)^2}} \Rightarrow \frac{v}{c} = \sqrt{\frac{\gamma^2 - 1}{\gamma^2}} \Rightarrow \frac{v}{c} = \sqrt{\frac{99}{100}} = 0.995$ .

(b)  $(pc)^2 = m^2 v^2 \gamma^2 c^2$ ,  $E^2 = m^2 c^4 \gamma^2$   
 $\Rightarrow \frac{E^2 - (pc)^2}{E^2} = 1 - (v/c)^2 = 0.01 = 1\%$ .

**EVALUATE:** When  $E \gg mc^2$ ,  $E \rightarrow pc$ .

**37.54. IDENTIFY and SET UP:** The clock on the plane measures the proper time  $\Delta t_0$ .

$\Delta t = 4.00 \text{ h} = 4.00 \text{ h}(3600 \text{ s/h}) = 1.44 \times 10^4 \text{ s}$ .

$\Delta t = \frac{\Delta t_0}{\sqrt{1 - u^2/c^2}}$  and  $\Delta t_0 = \Delta t \sqrt{1 - u^2/c^2}$

**EXECUTE:**  $\frac{u}{c}$  small so  $\sqrt{1 - u^2/c^2} = (1 - u^2/c^2)^{1/2} \approx 1 - \frac{1}{2} \frac{u^2}{c^2}$ ; thus  $\Delta t_0 = \Delta t \left( 1 - \frac{1}{2} \frac{u^2}{c^2} \right)$

The difference in the clock readings is

$\Delta t - \Delta t_0 = \frac{1}{2} \frac{u^2}{c^2} \Delta t = \frac{1}{2} \left( \frac{250 \text{ m/s}}{2.998 \times 10^8 \text{ m/s}} \right)^2 (1.44 \times 10^4 \text{ s}) = 5.01 \times 10^{-9} \text{ s}$ . The clock on the plane has the shorter elapsed time.

**EVALUATE:**  $\Delta t_0$  is always less than  $\Delta t$ ; our results agree with this. The speed of the plane is much less than the speed of light, so the difference in the reading of the two clocks is very small.

**37.55. IDENTIFY:** Since the speed is very close to the speed of light, we must use the relativistic formula for kinetic energy.

**SET UP:** The relativistic formula for kinetic energy is  $K = mc^2 \left( \frac{1}{\sqrt{1 - v^2/c^2}} - 1 \right)$  and the relativistic mass

is  $m_{\text{rel}} = \frac{m}{\sqrt{1 - v^2/c^2}}$ .

**EXECUTE:** (a)  $K = 7 \times 10^{12} \text{ eV} = 1.12 \times 10^{-6} \text{ J}$ . Using this value in the relativistic kinetic energy formula

and substituting the mass of the proton for  $m$ , we get  $K = mc^2 \left( \frac{1}{\sqrt{1 - v^2/c^2}} - 1 \right)$  which gives

$\frac{1}{\sqrt{1 - v^2/c^2}} = 7.45 \times 10^3$  and  $1 - \frac{v^2}{c^2} = \frac{1}{(7.45 \times 10^3)^2}$ . Solving for  $v$  gives  $1 - \frac{v^2}{c^2} = \frac{(c+v)(c-v)}{c^2} = \frac{2(c-v)}{c}$ ,

since  $c+v \approx 2c$ . Substituting  $v = (1-\Delta)c$ , we have  $1 - \frac{v^2}{c^2} = \frac{2(c-v)}{c} = \frac{2[c - (1-\Delta)c]}{c} = 2\Delta$ . Solving for  $\Delta$

gives  $\Delta = \frac{1 - v^2/c^2}{2} = \frac{1}{2(7.45 \times 10^3)^2} = 9 \times 10^{-9}$ , to one significant digit.

(b) Using the relativistic mass formula and the result that  $\frac{1}{\sqrt{1-v^2/c^2}} = 7.45 \times 10^3$ , we have

$$m_{\text{rel}} = \frac{m}{\sqrt{1-v^2/c^2}} = m \left( \frac{1}{\sqrt{1-v^2/c^2}} \right) = (7 \times 10^3)m, \text{ to one significant digit.}$$

EVALUATE: At such high speeds, the proton's mass is over 7000 times as great as its rest mass.

37.56. IDENTIFY and SET UP: The energy released is  $E = (\Delta m)c^2$ .  $\Delta m = \left( \frac{1}{10^4} \right) (12.0 \text{ kg})$ .  $P_{\text{av}} = \frac{E}{t}$ .

The change in gravitational potential energy is  $mg\Delta y$ .

EXECUTE: (a)  $E = (\Delta m)c^2 = \left( \frac{1}{10^4} \right) (12.0 \text{ kg}) (3.00 \times 10^8 \text{ m/s})^2 = 1.08 \times 10^{14} \text{ J}$ .

(b)  $P_{\text{av}} = \frac{E}{t} = \frac{1.08 \times 10^{14} \text{ J}}{4.00 \times 10^{-6} \text{ s}} = 2.70 \times 10^{19} \text{ W}$ .

(c)  $E = \Delta U = mg\Delta y$ .  $m = \frac{E}{g\Delta y} = \frac{1.08 \times 10^{14} \text{ J}}{(9.80 \text{ m/s}^2)(1.00 \times 10^3 \text{ m})} = 1.10 \times 10^{10} \text{ kg}$ .

EVALUATE: The mass decrease is only 1.2 grams, but the energy released is very large.

37.57. IDENTIFY and SET UP: In crown glass the speed of light is  $v = \frac{c}{n}$ . Calculate the kinetic energy of an electron that has this speed.

EXECUTE:  $v = \frac{2.998 \times 10^8 \text{ m/s}}{1.52} = 1.972 \times 10^8 \text{ m/s}$ .

$$K = mc^2(\gamma - 1)$$

$$mc^2 = (9.109 \times 10^{-31} \text{ kg})(2.998 \times 10^8 \text{ m/s})^2 = 8.187 \times 10^{-14} \text{ J} (1 \text{ eV}/1.602 \times 10^{-19} \text{ J}) = 0.5111 \text{ MeV}$$

$$\gamma = \frac{1}{\sqrt{1-v^2/c^2}} = \frac{1}{\sqrt{1-((1.972 \times 10^8 \text{ m/s})/(2.998 \times 10^8 \text{ m/s}))^2}} = 1.328$$

$$K = mc^2(\gamma - 1) = (0.5111 \text{ MeV})(1.328 - 1) = 0.168 \text{ MeV}$$

EVALUATE: No object can travel faster than the speed of light in vacuum but there is nothing that prohibits an object from traveling faster than the speed of light in some material.

37.58. IDENTIFY: Apply conservation of momentum to the process of emitting a photon.

SET UP: A photon has zero rest mass and for it  $E = pc$ .

EXECUTE: (a)  $v = \frac{p}{m} = \frac{(E/c)}{m} = \frac{E}{mc}$ , where the atom and the photon have the same magnitude of momentum,  $E/c$ .

(b)  $v = \frac{E}{mc} \ll c$ , so  $E \ll mc^2$ .

EVALUATE: The rest energy of a hydrogen atom is about 940 MeV and typical energies of photons emitted by atoms are a few eV, so  $E \ll mc^2$  is typical. If this is the case, then treating the motion of the atom nonrelativistically is an accurate approximation.

37.59. IDENTIFY and SET UP: Let  $S$  be the lab frame and  $S'$  be the frame of the proton that is moving in the  $+x$ -direction, so  $u = +c/2$ . The reference frames and moving particles are shown in Figure 37.59. The other proton moves in the  $-x$ -direction in the lab frame, so  $v = -c/2$ . A proton has rest mass

$$m_p = 1.67 \times 10^{-27} \text{ kg} \text{ and rest energy } m_p c^2 = 938 \text{ MeV}.$$

EXECUTE: (a)  $v' = \frac{v - u}{1 - uv/c^2} = \frac{-c/2 - c/2}{1 - (c/2)(-c/2)/c^2} = -\frac{4c}{5}$

The speed of each proton relative to the other is  $\frac{4}{5}c$ .

(b) In nonrelativistic mechanics the speeds just add and the speed of each relative to the other is  $c$ .

$$(c) K = \frac{mc^2}{\sqrt{1-v^2/c^2}} - mc^2$$

(i) Relative to the lab frame each proton has speed  $v = c/2$ . The total kinetic energy of each proton is

$$K = \frac{938 \text{ MeV}}{\sqrt{1-\left(\frac{1}{2}\right)^2}} - (938 \text{ MeV}) = 145 \text{ MeV}.$$

(ii) In its rest frame one proton has zero speed and zero kinetic energy and the other has speed  $\frac{4}{5}c$ . In this

frame the kinetic energy of the moving proton is  $K = \frac{938 \text{ MeV}}{\sqrt{1-\left(\frac{4}{5}\right)^2}} - (938 \text{ MeV}) = 625 \text{ MeV}.$

(d) (i) Each proton has speed  $v = c/2$  and kinetic energy

$$K = \frac{1}{2}mv^2 = \left(\frac{1}{2}m\right)(c/2)^2 = \frac{mc^2}{8} = \frac{938 \text{ MeV}}{8} = 117 \text{ MeV}.$$

(ii) One proton has speed  $v = 0$  and the other has speed  $c$ . The kinetic energy of the moving proton is

$$K = \frac{1}{2}mc^2 = \frac{938 \text{ MeV}}{2} = 469 \text{ MeV}.$$

**EVALUATE:** The relativistic expression for  $K$  gives a larger value than the nonrelativistic expression. The kinetic energy of the system is different in different frames.

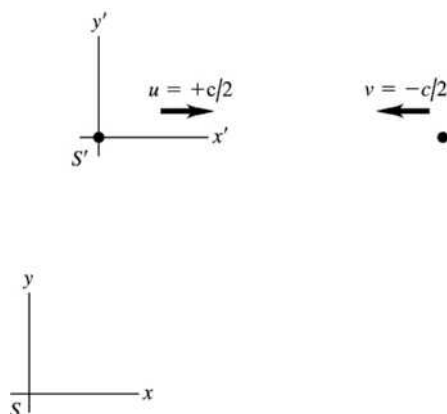


Figure 37.59

**37.60. IDENTIFY:** The protons are moving at speeds that are comparable to the speed of light, so we must use the relativistic velocity addition formula.

**SET UP:**  $S$  is lab frame and  $S'$  is frame of proton moving in  $+x$ -direction.  $v_x = -0.600c$ . In lab frame

$$\text{each proton has speed } \alpha c. \quad u = +\alpha c. \quad v_x = -\alpha c. \quad v_x = \frac{v'_x + u}{1 + uv'_x/c^2} = \frac{-0.600c + \alpha c}{1 - 0.600\alpha} = -\alpha c.$$

**EXECUTE:**  $(1 - 0.600\alpha)(-\alpha) = -0.600 + \alpha. \quad 0.600\alpha^2 - 2\alpha + 0.600 = 0.$  Quadratic formula gives  $\alpha = 3.00$  or  $\alpha = 0.333$ . Can't have  $v > c$  so  $\alpha = 0.333$ . Each proton has speed  $0.333c$  in the earth frame.

**EVALUATE:** To the earth observer, the protons are separating at  $2(0.333c) = 0.666c$ , but to the protons they are separating at  $0.600c$ .



**37.61. IDENTIFY and SET UP:** Follow the procedure specified in the problem.

**EXECUTE:**  $x'^2 = c^2 t'^2 \Rightarrow (x - ut)^2 \gamma^2 = c^2 \gamma^2 (t - ux/c^2)^2$

$$\Rightarrow x - ut = c(t - ux/c^2) \Rightarrow x \left(1 + \frac{u}{c}\right) = \frac{1}{c} x(u + c) = t(u + c) \Rightarrow x = ct \Rightarrow x^2 = c^2 t^2.$$

**EVALUATE:** The light pulse has the same speed  $c$  in both frames.

**37.62. IDENTIFY and SET UP:** Let  $S$  be the lab frame and let  $S'$  be the frame of the nucleus. Let the  $+x$ -direction be the direction the nucleus is moving.  $u = 0.7500c$ .

**EXECUTE: (a)**  $v' = +0.9995c$ .  $v = \frac{v' + u}{1 + uv'/c^2} = \frac{0.9995c + 0.7500c}{1 + (0.7500)(0.9995)} = 0.999929c$

**(b)**  $v' = -0.9995c$ .  $v = \frac{-0.9995c + 0.7500c}{1 + (0.7500)(-0.9995)} = -0.9965c$

**(c)** emitted in same direction:

**(i)**  $K = \left( \frac{1}{\sqrt{1 - v^2/c^2}} - 1 \right) mc^2 = (0.511 \text{ MeV}) \left( \frac{1}{\sqrt{1 - (0.999929)^2}} - 1 \right) = 42.4 \text{ MeV}$

**(ii)**  $K' = \left( \frac{1}{\sqrt{1 - v'^2/c^2}} - 1 \right) mc^2 = (0.511 \text{ MeV}) \left( \frac{1}{\sqrt{1 - (0.9995)^2}} - 1 \right) = 15.7 \text{ MeV}$

**(d)** emitted in opposite direction:

**(i)**  $K = \left( \frac{1}{\sqrt{1 - v^2/c^2}} - 1 \right) mc^2 = (0.511 \text{ MeV}) \left( \frac{1}{\sqrt{1 - (0.9965)^2}} - 1 \right) = 5.60 \text{ MeV}$

**(ii)**  $K' = \left( \frac{1}{\sqrt{1 - v'^2/c^2}} - 1 \right) mc^2 = (0.511 \text{ MeV}) \left( \frac{1}{\sqrt{1 - (0.9995)^2}} - 1 \right) = 15.7 \text{ MeV}$

**37.63. IDENTIFY and SET UP:** Use Eq. (37.30), with  $a = dv/dt$ , to obtain an expression for  $dv/dt$ . Separate the variables  $v$  and  $t$  and integrate to obtain an expression for  $v(t)$ . In this expression, let  $t \rightarrow \infty$ .

**EXECUTE:**  $a = \frac{dv}{dt} = \frac{F}{m} (1 - v^2/c^2)^{3/2}$ . (One-dimensional motion is assumed, and all the  $F$ ,  $v$  and  $a$  refer to  $x$ -components.)

$$\frac{dv}{(1 - v^2/c^2)^{3/2}} = \left( \frac{F}{m} \right) dt$$

Integrate from  $t = 0$ , when  $v = 0$ , to time  $t$ , when the velocity is  $v$ .

$$\int_0^v \frac{dv}{(1 - v^2/c^2)^{3/2}} = \int_0^t \left( \frac{F}{m} \right) dt$$

Since  $F$  is constant,  $\int_0^t \left( \frac{F}{m} \right) dt = \frac{Ft}{m}$ . In the velocity integral make the change of variable  $y = v/c$ ; then

$$dy = dv/c.$$

$$\int_0^v \frac{dv}{(1 - v^2/c^2)^{3/2}} = c \int_0^{v/c} \frac{dy}{(1 - y^2)^{3/2}} = c \left[ \frac{y}{(1 - y^2)^{1/2}} \right]_0^{v/c} = \frac{v}{\sqrt{1 - v^2/c^2}}$$

$$\text{Thus } \frac{v}{\sqrt{1 - v^2/c^2}} = \frac{Ft}{m}.$$

Solve this equation for  $v$ :

$$\frac{v^2}{1 - v^2/c^2} = \left( \frac{Ft}{m} \right)^2 \text{ and } v^2 = \left( \frac{Ft}{m} \right)^2 (1 - v^2/c^2)$$

$$v^2 \left( 1 + \left( \frac{Ft}{mc} \right)^2 \right) = \left( \frac{Ft}{m} \right)^2 \quad \text{so } v = \frac{(Ft/m)}{\sqrt{1 + (Ft/mc)^2}} = c \frac{Ft}{\sqrt{m^2 c^2 + F^2 t^2}}$$

$$\text{As } t \rightarrow \infty, \frac{Ft}{\sqrt{m^2 c^2 + F^2 t^2}} \rightarrow \frac{Ft}{\sqrt{F^2 t^2}} \rightarrow 1, \text{ so } v \rightarrow c.$$

**EVALUATE:** Note that  $\frac{Ft}{\sqrt{m^2 c^2 + F^2 t^2}}$  is always less than 1, so  $v < c$  always and  $v$  approaches  $c$  only

when  $t \rightarrow \infty$ .

**37.64. IDENTIFY:** Apply the Lorentz coordinate transformation.

**SET UP:** Let  $t$  and  $t'$  be time intervals between the events as measured in the two frames and let  $x$  and  $x'$  be the difference in the positions of the two events as measured in the two frames.

**EXECUTE:** Setting  $x = 0$  in Eq. (37.21), the first equation becomes  $x' = -\gamma ut$  and the last, upon multiplication by  $c$ , becomes  $ct' = \gamma ct$ . Squaring and subtracting gives  $c^2 t'^2 - x'^2 = \gamma^2 t^2 (c^2 - u^2)$ . But  $\gamma^2 = c^2 / (c^2 - v^2)$ , so  $\gamma^2 t^2 (c^2 - v^2) = c^2 t^2$ . Therefore,  $c^2 t'^2 - x'^2 = c^2 t^2$  and  $x' = c \sqrt{t'^2 - t^2} = 4.53 \times 10^8 \text{ m}$ .

**EVALUATE:** We did not have to calculate the speed  $u$  of frame  $S'$  relative to frame  $S$ .

**37.65. (a) IDENTIFY and SET UP:** Use the Lorentz coordinate transformation (Eq. 37.21) for  $(x_1, t_1)$  and  $(x_2, t_2)$ :

$$x'_1 = \frac{x_1 - ut_1}{\sqrt{1 - u^2/c^2}}, \quad x'_2 = \frac{x_2 - ut_2}{\sqrt{1 - u^2/c^2}}$$

$$t'_1 = \frac{t_1 - ux_1/c^2}{\sqrt{1 - u^2/c^2}}, \quad t'_2 = \frac{t_2 - ux_2/c^2}{\sqrt{1 - u^2/c^2}}$$

Same point in  $S'$  implies  $x'_1 = x'_2$ . What then is  $\Delta t' = t'_2 - t'_1$ ?

**EXECUTE:**  $x'_1 = x'_2$  implies  $x_1 - ut_1 = x_2 - ut_2$

$$u(t_2 - t_1) = x_2 - x_1 \quad \text{and} \quad u = \frac{x_2 - x_1}{t_2 - t_1} = \frac{\Delta x}{\Delta t}$$

From the time transformation equations,

$$\Delta t' = t'_2 - t'_1 = \frac{1}{\sqrt{1 - u^2/c^2}} (\Delta t - u \Delta x / c^2)$$

Using the result that  $u = \frac{\Delta x}{\Delta t}$  gives

$$\Delta t' = \frac{1}{\sqrt{1 - (\Delta x)^2 / ((\Delta t)^2 c^2)}} (\Delta t - (\Delta x)^2 / ((\Delta t) c^2))$$

$$\Delta t' = \frac{\Delta t}{\sqrt{(\Delta t)^2 - (\Delta x)^2 / c^2}} (\Delta t - (\Delta x)^2 / ((\Delta t) c^2))$$

$$\Delta t' = \frac{(\Delta t)^2 - (\Delta x)^2 / c^2}{\sqrt{(\Delta t)^2 - (\Delta x)^2 / c^2}} = \sqrt{(\Delta t)^2 - (\Delta x / c)^2}, \text{ as was to be shown.}$$

This equation doesn't have a physical solution (because of a negative square root) if  $(\Delta x / c)^2 > (\Delta t)^2$  or  $\Delta x \geq c \Delta t$ .

**(b) IDENTIFY and SET UP:** Now require that  $t'_2 = t'_1$  (the two events are simultaneous in  $S'$ ) and use the Lorentz coordinate transformation equations.

**EXECUTE:**  $t'_2 = t'_1$  implies  $t_1 - ux_1/c^2 = t_2 - ux_2/c^2$

$$t_2 - t_1 = \left( \frac{x_2 - x_1}{c^2} \right) u \quad \text{so} \quad \Delta t = \left( \frac{\Delta x}{c^2} \right) u \quad \text{and} \quad u = \frac{c^2 \Delta t}{\Delta x}$$

From the Lorentz transformation equations,

$$\Delta x' = x'_2 - x'_1 = \left( \frac{1}{\sqrt{1 - u^2/c^2}} \right) (\Delta x - u \Delta t).$$

Using the result that  $u = c^2 \Delta t / \Delta x$  gives

$$\Delta x' = \frac{1}{\sqrt{1 - c^2 (\Delta t)^2 / (\Delta x)^2}} (\Delta x - c^2 (\Delta t)^2 / \Delta x)$$

$$\Delta x' = \frac{\Delta x}{\sqrt{(\Delta x)^2 - c^2 (\Delta t)^2}} (\Delta x - c^2 (\Delta t)^2 / \Delta x)$$

$$\Delta x' = \frac{(\Delta x)^2 - c^2 (\Delta t)^2}{\sqrt{(\Delta x)^2 - c^2 (\Delta t)^2}} = \sqrt{(\Delta x)^2 - c^2 (\Delta t)^2}$$

**(c) IDENTIFY and SET UP:** The result from part (b) is  $\Delta x' = \sqrt{(\Delta x)^2 - c^2 (\Delta t)^2}$ .

Solve for  $\Delta t$ :  $(\Delta x')^2 = (\Delta x)^2 - c^2 (\Delta t)^2$

$$\text{EXECUTE: } \Delta t = \frac{\sqrt{(\Delta x)^2 - (\Delta x')^2}}{c} = \frac{\sqrt{(5.00 \text{ m})^2 - (2.50 \text{ m})^2}}{2.998 \times 10^8 \text{ m/s}} = 1.44 \times 10^{-8} \text{ s}$$

**EVALUATE:** This provides another illustration of the concept of simultaneity (Section 37.2): events observed to be simultaneous in one frame are not simultaneous in another frame that is moving relative to the first.

**37.66. IDENTIFY:** Apply the relativistic expressions for kinetic energy, velocity transformation, length contraction and time dilation.

**SET UP:** In part (c) let  $S'$  be the earth frame and let  $S$  be the frame of the ball. Let the direction from Einstein to Lorentz be positive, so  $u = -1.80 \times 10^8 \text{ m/s}$ . In part (d) the proper length is  $l_0 = 20.0 \text{ m}$  and in part (f) the proper time is measured by the rabbit.

**EXECUTE: (a)**  $80.0 \text{ m/s}$  is nonrelativistic, and  $K = \frac{1}{2}mv^2 = 186 \text{ J}$ .

**(b)**  $K = (\gamma - 1)mc^2 = 1.31 \times 10^{15} \text{ J}$ .

**(c)** In Eq. (37.23),  $v' = 2.20 \times 10^8 \text{ m/s}$ ,  $u = -1.80 \times 10^8 \text{ m/s}$ , and so  $v = 7.14 \times 10^7 \text{ m/s}$ .

**(d)**  $l = \frac{l_0}{\gamma} = \frac{20.0 \text{ m}}{\gamma} = 13.6 \text{ m}$ .

**(e)**  $\frac{20.0 \text{ m}}{2.20 \times 10^8 \text{ m/s}} = 9.09 \times 10^{-8} \text{ s}$ .

**(f)**  $\Delta t_0 = \frac{\Delta t}{\gamma} = 6.18 \times 10^{-8} \text{ s}$

**EVALUATE:** In part (f) we could also calculate  $\Delta t_0$  as  $\Delta t_0 = \frac{13.6 \text{ m}}{2.20 \times 10^8 \text{ m/s}} = 6.18 \times 10^{-8} \text{ s}$ .

**37.67. IDENTIFY and SET UP:** An increase in wavelength corresponds to a decrease in frequency ( $f = c/\lambda$ ), so

the atoms are moving away from the earth. Receding, so use Eq. (37.26):  $f = \sqrt{\frac{c-u}{c+u}} f_0$

**EXECUTE:** Solve for  $u$ :  $(ff_0)^2(c+u) = c-u$  and  $u = c \left( \frac{1 - (ff_0)^2}{1 + (ff_0)^2} \right)$

$f = c/\lambda$ ,  $f_0 = c/\lambda_0$  so  $ff_0 = \lambda_0/\lambda$

$$u = c \left( \frac{1 - (\lambda_0/\lambda)^2}{1 + (\lambda_0/\lambda)^2} \right) = c \left( \frac{1 - (656.3/953.4)^2}{1 + (656.3/953.4)^2} \right) = 0.357c = 1.07 \times 10^8 \text{ m/s}$$

**EVALUATE:** The relative speed is large, 36% of  $c$ . The cosmological implication of such observations will be discussed in Chapter 44.

- 37.68. IDENTIFY:** The baseball is moving toward the radar gun, so apply the Doppler effect as expressed in Eq. (37.25).

**SET UP:** The baseball had better be moving nonrelativistically, so the Doppler shift formula (Eq. (37.25)) becomes  $f \equiv f_0(1 - (u/c))$ . In the baseball's frame, this is the frequency with which the radar waves strike the baseball, and the baseball reradiates at  $f$ . But in the coach's frame, the reflected waves are Doppler shifted again, so the detected frequency is  $f(1 - (u/c)) = f_0(1 - (u/c))^2 \approx f_0(1 - 2(u/c))$ .

**EXECUTE:**  $\Delta f = 2f_0(u/c)$  and the fractional frequency shift is  $\frac{\Delta f}{f_0} = 2(u/c)$ .

$$u = \frac{\Delta f}{2f_0}c = \frac{(2.86 \times 10^{-7})}{2}(3.00 \times 10^8 \text{ m/s}) = 42.9 \text{ m/s} = 154 \text{ km/h} = 92.5 \text{ mi/h.}$$

**EVALUATE:**  $u \ll c$ , so using the approximate expression in place of Eq. (37.25) is very accurate.

- 37.69. IDENTIFY and SET UP:** 500 light years =  $4.73 \times 10^{18}$  m. The proper distance  $l_0$  to the star is 500 light years. The energy needed is the kinetic energy of the rocket at its final speed.

**EXECUTE: (a)**  $u = 0.50c$ .  $\Delta t = \frac{d}{u} = \frac{4.73 \times 10^{18} \text{ m}}{(0.50)(3.00 \times 10^8 \text{ m/s})} = 3.2 \times 10^{10} \text{ s} = 1000 \text{ y}$

The proper time is measured by the astronauts.  $\Delta t_0 = \Delta t \sqrt{1 - u^2/c^2} = 866 \text{ y}$

$$K = \frac{mc^2}{\sqrt{1 - v^2/c^2}} - mc^2 = (1000 \text{ kg})(3.00 \times 10^8 \text{ m/s})^2 \left( \frac{1}{\sqrt{1 - (0.500)^2}} - 1 \right) = 1.4 \times 10^{19} \text{ J}$$

This is 14% of the U.S. yearly use of energy.

**(b)**  $u = 0.99c$ .  $\Delta t = \frac{d}{u} = \frac{4.73 \times 10^{18} \text{ m}}{(0.99)(3.00 \times 10^8 \text{ m/s})} = 1.6 \times 10^{10} \text{ s} = 505 \text{ yr}$ ,  $\Delta t_0 = 71 \text{ y}$

$$K = (9.00 \times 10^{19} \text{ J}) \left( \frac{1}{\sqrt{1 - (0.99)^2}} - 1 \right) = 5.5 \times 10^{20} \text{ J}$$

This is 5.5 times (550%) the U.S. yearly use.

**(c)**  $u = 0.9999c$ .  $\Delta t = \frac{d}{u} = \frac{4.73 \times 10^{18} \text{ m}}{(0.9999)(3.00 \times 10^8 \text{ m/s})} = 1.58 \times 10^{10} \text{ s} = 501 \text{ y}$ ,  $\Delta t_0 = 7.1 \text{ y}$ .

$$K = (9.00 \times 10^{19} \text{ J}) \left( \frac{1}{\sqrt{1 - (0.9999)^2}} - 1 \right) = 6.3 \times 10^{21} \text{ J.}$$

This is 63 times (6300%) the U.S. yearly use.

**EVALUATE:** The energy cost of accelerating a rocket to these speeds is immense.

- 37.70. IDENTIFY and SET UP:** For part (a) follow the procedure specified in the hint. For part (b) apply Eqs. (37.25) and (37.26).

**EXECUTE: (a)** As in the hint, both the sender and the receiver measure the same distance. However, in our frame, the ship has moved between emission of successive wavefronts, and we can use the time  $T = 1/f$  as the proper time, with the result that  $f = \gamma f_0 > f_0$ .

**(b) Toward:**  $f_1 = f_0 \sqrt{\frac{c+u}{c-u}} = 345 \text{ MHz} \left( \frac{1+0.758}{1-0.758} \right)^{1/2} = 930 \text{ MHz}$  and

$$f_1 - f_0 = 930 \text{ MHz} - 345 \text{ MHz} = 585 \text{ MHz.}$$

Away:  $f_2 = f_0 \sqrt{\frac{c-u}{c+u}} = 345 \text{ MHz} \left( \frac{1-0.758}{1+0.758} \right)^{1/2} = 128 \text{ MHz}$  and  $f_2 - f_0 = -217 \text{ MHz.}$

**(c)**  $f_3 = \gamma f_0 = 1.53 f_0 = 528 \text{ MHz}$ ,  $f_3 - f_0 = 183 \text{ MHz.}$

**EVALUATE:** The frequency in part (c) is the average of the two frequencies in part (b). A little algebra shows that  $f_3$  is precisely equal to  $(f_1 + f_2)/2$ .

- 37.71. IDENTIFY:** We need to use the relativistic form of Newton's second law because the speed of the proton is close to the speed of light.

**SET UP:**  $\vec{F}$  and  $\vec{v}$  are perpendicular, so  $F = \gamma m a = \gamma m \frac{v^2}{R}$ .  $\gamma = \frac{1}{\sqrt{1 - v^2/c^2}} = \frac{1}{\sqrt{1 - (0.750)^2}} = 1.512$ .

**EXECUTE:**  $F = (1.512)(1.67 \times 10^{-27} \text{ kg}) \frac{[(0.750)(3.00 \times 10^8 \text{ m/s})]^2}{628 \text{ m}} = 2.04 \times 10^{-13} \text{ N}$ .

**EVALUATE:** If we ignored relativity, the force would be

$F_{\text{rel}}/\gamma = \frac{2.04 \times 10^{-13} \text{ N}}{1.512} = 1.35 \times 10^{-13} \text{ N}$ , which is substantially less than the relativistic force.

- 37.72. IDENTIFY:** Apply the Lorentz velocity transformation.

**SET UP:** Let the tank and the light both be traveling in the  $+x$ -direction. Let  $S$  be the lab frame and let  $S'$  be the frame of the tank of water.

**EXECUTE:** In Eq. (37.23),  $u = V$ ,  $v' = (c/n)$ .  $v = \frac{(c/n) + V}{1 + \frac{cV}{nc^2}} = \frac{(c/n) + V}{1 + (V/nc)}$ . For  $V \ll c$ ,

$(1 + V/nc)^{-1} \approx (1 - V/nc)$ . This gives

$v \approx ((cn) + V)(1 - (V/nc)) = (nc/n) + V - (V/n^2) - (V^2/nc) \approx \frac{c}{n} + \left(1 - \frac{1}{n^2}\right)V$ , so  $k = \left(1 - \frac{1}{n^2}\right)$ . For water,

$n = 1.333$  and  $k = 0.437$ .

**EVALUATE:** The Lorentz transformation predicts a value of  $k$  in excellent agreement with the value that is measured experimentally.

- 37.73. IDENTIFY and SET UP:** Follow the procedure specified in the hint.

**EXECUTE: (a)**  $a' = \frac{dv}{dt'}$ .  $dt' = \gamma(dt - udx/c^2)$ .  $dv' = \frac{dv}{(1 - uv/c^2)} + \frac{v - u}{(1 - uv/c^2)^2} \frac{u}{c^2} dv$

$\frac{dv'}{dv} = \frac{1}{1 - uv/c^2} + \frac{v - u}{(1 - uv/c^2)^2} \left(\frac{u}{c^2}\right)$ .  $dv' = dv \left( \frac{1}{1 - uv/c^2} + \frac{(v - u)u/c^2}{(1 - uv/c^2)^2} \right) = dv \left( \frac{1 - u^2/c^2}{(1 - uv/c^2)^2} \right)$

$a' = \frac{dv \frac{(1 - u^2/c^2)}{(1 - uv/c^2)^2}}{\gamma dt - u \gamma dx/c^2} = \frac{dv}{dt} \frac{(1 - u^2/c^2)}{(1 - uv/c^2)^2} \frac{1}{\gamma(1 - uv/c^2)} = a(1 - u^2/c^2)^{3/2} (1 - uv/c^2)^{-3}$ .

**(b)** Changing frames from  $S' \rightarrow S$  just involves changing

$a \rightarrow a'$ ,  $v \rightarrow -v' \Rightarrow a = a'(1 - u^2/c^2)^{3/2} \left(1 + \frac{uv'}{c^2}\right)^{-3}$ .

**EVALUATE:**  $a'_x$  depends not only on  $a_x$  and  $u$ , but also on  $v_x$ , the component of the velocity of the object in frame  $S$ .

- 37.74. IDENTIFY and SET UP:** Follow the procedures specified in the problem.

**EXECUTE: (a)** The speed  $v'$  is measured relative to the rocket, and so for the rocket and its occupant,  $v' = 0$ . The acceleration as seen in the rocket is given to be  $a' = g$ , and so the acceleration as measured on

the earth is  $a = \frac{du}{dt} = g \left(1 - \frac{u^2}{c^2}\right)^{3/2}$ .

**(b)** With  $v_1 = 0$  when  $t = 0$ ,

$dt = \frac{1}{g} \frac{du}{(1 - u^2/c^2)^{3/2}}$ .  $\int_0^{t_1} dt = \frac{1}{g} \int_0^{v_1} \frac{du}{(1 - u^2/c^2)^{3/2}}$ .  $t_1 = \frac{v_1}{g \sqrt{1 - v_1^2/c^2}}$ .

(c)  $dt' = \gamma dt = dt / \sqrt{1 - u^2/c^2}$ , so the relation in part (b) between  $dt$  and  $du$ , expressed in terms of  $dt'$  and  $du$ , is  $dt' = \gamma dt = \frac{1}{\sqrt{1 - u^2/c^2}} \frac{du}{g(1 - u^2/c^2)^{3/2}} = \frac{1}{g} \frac{du}{(1 - u^2/c^2)^2}$ .

Integrating as above (perhaps using the substitution  $z = u/c$ ) gives  $t'_1 = \frac{c}{g} \operatorname{arctanh} \left( \frac{v_1}{c} \right)$ . For those who wish to avoid inverse hyperbolic functions, the above integral may be done by the method of partial fractions;  $g dt' = \frac{du}{(1 + u/c)(1 - u/c)} = \frac{1}{2} \left[ \frac{du}{1 + u/c} + \frac{du}{1 - u/c} \right]$ , which integrates to  $t'_1 = \frac{c}{2g} \ln \left( \frac{c + v_1}{c - v_1} \right)$ .

(d) Solving the expression from part (c) for  $v_1$  in terms of  $t'_1$ ,  $(v_1/c) = \tanh(gt'_1/c)$ , so that

$\sqrt{1 - (v_1/c)^2} = 1/\cosh(gt'_1/c)$ , using the appropriate identities for hyperbolic functions. Using this in the expression found in part (b),  $t_1 = \frac{c}{g} \frac{\tanh(gt'_1/c)}{1/\cosh(gt'_1/c)} = \frac{c}{g} \sinh(gt'_1/c)$ , which may be rearranged slightly as

$\frac{gt'_1}{c} = \sinh \left( \frac{gt'_1}{c} \right)$ . If hyperbolic functions are not used,  $v_1$  in terms of  $t'_1$  is found to be  $\frac{v_1}{c} = \frac{e^{gt'_1/c} - e^{-gt'_1/c}}{e^{gt'_1/c} + e^{-gt'_1/c}}$

which is the same as  $\tanh(gt'_1/c)$ . Inserting this expression into the result of part (b) gives, after much

algebra,  $t_1 = \frac{c}{2g} (e^{gt'_1/c} - e^{-gt'_1/c})$ , which is equivalent to the expression found using hyperbolic functions.

(e) After the first acceleration period (of 5 years by Stella's clock), the elapsed time on earth is

$$t'_1 = \frac{c}{g} \sinh(gt'_1/c) = 2.65 \times 10^9 \text{ s} = 84.0 \text{ yr.}$$

The elapsed time will be the same for each of the four parts of the voyage, so when Stella has returned, Terra has aged 336 yr and the year is 2436. (Keeping more precision than is given in the problem gives February 7 of that year.)

**EVALUATE:** Stella has aged only 20 yrs, much less than Terra.

**37.75. IDENTIFY:** Apply the Doppler effect equation.

**SET UP:** At the two positions shown in the figure given in the problem, the velocities of the star relative to the earth are  $u + v$  and  $u - v$ , where  $u$  is the velocity of the center of mass and  $v$  is the orbital velocity.

**EXECUTE:** (a)  $f_0 = 4.568110 \times 10^{14} \text{ Hz}$ ;  $f_+ = 4.568910 \times 10^{14} \text{ Hz}$ ;  $f_- = 4.567710 \times 10^{14} \text{ Hz}$

$$\left. \begin{aligned} f_+ &= \sqrt{\frac{c + (u + v)}{c - (u + v)}} f_0 \\ f_- &= \sqrt{\frac{c + (u - v)}{c - (u - v)}} f_0 \end{aligned} \right\} \Rightarrow \begin{aligned} f_+^2 (c - (u + v)) &= f_0^2 (c + (u + v)) \\ f_-^2 (c - (u - v)) &= f_0^2 (c + (u - v)) \end{aligned}$$

$$(u + v) = \frac{(f_+/f_0)^2 - 1}{(f_+/f_0)^2 + 1} c \quad \text{and} \quad (u - v) = \frac{(f_-/f_0)^2 - 1}{(f_-/f_0)^2 + 1} c. \quad u + v = 5.25 \times 10^4 \text{ m/s} \quad \text{and} \quad u - v = -2.63 \times 10^4 \text{ m/s.}$$

This gives  $u = +1.31 \times 10^4 \text{ m/s}$  (moving toward at 13.1 km/s) and  $v = 3.94 \times 10^4 \text{ m/s}$ .

(b)  $v = 3.94 \times 10^4 \text{ m/s}$ ;  $T = 11.0 \text{ days}$ .  $2\pi R = vt \Rightarrow$

$$R = \frac{(3.94 \times 10^4 \text{ m/s})(11.0 \text{ days})(24 \text{ hrs/day})(3600 \text{ sec/hr})}{2\pi} = 5.96 \times 10^9 \text{ m. This is about}$$

0.040 times the earth-sun distance.

Also the gravitational force between them (a distance of  $2R$ ) must equal the centripetal force from the center of mass:

$$\frac{(Gm^2)}{(2R)^2} = \frac{mv^2}{R} \Rightarrow m = \frac{4Rv^2}{G} = \frac{4(5.96 \times 10^9 \text{ m})(3.94 \times 10^4 \text{ m/s})^2}{6.672 \times 10^{-11} \text{ N} \cdot \text{m}^2/\text{kg}^2} = 5.55 \times 10^{29} \text{ kg} = 0.279 m_{\text{sun}}.$$

**EVALUATE:**  $u$  and  $v$  are both much less than  $c$ , so we could have used the approximate expression  $\Delta f = \pm f_0 v_{\text{rev}}/c$ , where  $v_{\text{rev}}$  is the speed of the source relative to the observer.

**37.76. IDENTIFY and SET UP:** Apply the procedures specified in the problem.

**EXECUTE:** For any function  $f = f(x, t)$  and  $x = x(x', t')$ ,  $t = t(x', t')$ , let  $F(x', t') = f(x(x', t'), t(x', t'))$  and use the standard (but mathematically improper) notation  $F(x', t') = f(x', t')$ . The chain rule is then

$$\frac{\partial f(x', t')}{\partial x} = \frac{\partial f(x, t)}{\partial x'} \frac{\partial x'}{\partial x} + \frac{\partial f(x', t')}{\partial t'} \frac{\partial t'}{\partial x},$$

$$\frac{\partial f(x', t')}{\partial t} = \frac{\partial f(x, t)}{\partial x'} \frac{\partial x'}{\partial t} + \frac{\partial f(x', t')}{\partial t'} \frac{\partial t'}{\partial t}.$$

In this solution, the explicit dependence of the functions on the sets of dependent variables is suppressed,

and the above relations are then  $\frac{\partial f}{\partial x} = \frac{\partial f}{\partial x'} \frac{\partial x'}{\partial x} + \frac{\partial f}{\partial t'} \frac{\partial t'}{\partial x}$ ,  $\frac{\partial f}{\partial t} = \frac{\partial f}{\partial x'} \frac{\partial x'}{\partial t} + \frac{\partial f}{\partial t'} \frac{\partial t'}{\partial t}$ .

(a)  $\frac{\partial x'}{\partial x} = 1$ ,  $\frac{\partial x'}{\partial t} = -v$ ,  $\frac{\partial t'}{\partial x} = 0$  and  $\frac{\partial t'}{\partial t} = 1$ . Then,  $\frac{\partial E}{\partial x} = \frac{\partial E}{\partial x'}$ , and  $\frac{\partial^2 E}{\partial x^2} = \frac{\partial^2 E}{\partial x'^2}$ . For the time derivative,

$\frac{\partial E}{\partial t} = -v \frac{\partial E}{\partial x'} + \frac{\partial E}{\partial t'}$ . To find the second time derivative, the chain rule must be applied to both terms; that is,

$$\frac{\partial}{\partial t} \frac{\partial E}{\partial x'} = -v \frac{\partial^2 E}{\partial x'^2} + \frac{\partial^2 E}{\partial t' \partial x'},$$

$$\frac{\partial}{\partial t} \frac{\partial E}{\partial t'} = -v \frac{\partial^2 E}{\partial x' \partial t'} + \frac{\partial^2 E}{\partial t'^2}.$$

Using these in  $\frac{\partial^2 E}{\partial t^2}$ , collecting terms and equating the mixed partial derivatives gives

$\frac{\partial^2 E}{\partial t^2} = v^2 \frac{\partial^2 E}{\partial x'^2} - 2v \frac{\partial^2 E}{\partial x' \partial t'} + \frac{\partial^2 E}{\partial t'^2}$ , and using this and the above expression for  $\frac{\partial^2 E}{\partial x'^2}$  gives the result.

(b) For the Lorentz transformation,  $\frac{\partial x'}{\partial x} = \gamma$ ,  $\frac{\partial x'}{\partial t} = \gamma v$ ,  $\frac{\partial t'}{\partial x} = \gamma v/c^2$  and  $\frac{\partial t'}{\partial t} = \gamma$ .

The first partials are then

$$\frac{\partial E}{\partial x} = \gamma \frac{\partial E}{\partial x'} - \gamma \frac{v}{c^2} \frac{\partial E}{\partial t'}, \quad \frac{\partial E}{\partial t} = -\gamma v \frac{\partial E}{\partial x'} + \gamma \frac{\partial E}{\partial t'}$$

and the second partials are (again equating the mixed partials)

$$\frac{\partial^2 E}{\partial x^2} = \gamma^2 \frac{\partial^2 E}{\partial x'^2} + \gamma^2 \frac{v^2}{c^4} \frac{\partial^2 E}{\partial t'^2} - 2\gamma^2 \frac{v}{c^2} \frac{\partial^2 E}{\partial x' \partial t'}$$

$$\frac{\partial^2 E}{\partial t^2} = \gamma^2 v^2 \frac{\partial^2 E}{\partial x'^2} + \gamma^2 \frac{\partial^2 E}{\partial t'^2} - 2\gamma^2 v \frac{\partial^2 E}{\partial x' \partial t'}.$$

Substituting into the wave equation and combining terms (note that the mixed partials cancel),

$$\frac{\partial^2 E}{\partial x^2} - \frac{1}{c^2} \frac{\partial^2 E}{\partial t^2} = \gamma^2 \left( 1 - \frac{v^2}{c^2} \right) \frac{\partial^2 E}{\partial x'^2} + \gamma^2 \left( \frac{v^2}{c^4} - \frac{1}{c^2} \right) \frac{\partial^2 E}{\partial t'^2} = \frac{\partial^2 E}{\partial x'^2} - \frac{1}{c^2} \frac{\partial^2 E}{\partial t'^2} = 0.$$

**EVALUATE:** The general form of the wave equation is given by Eq. (32.1). The coefficient of the  $\partial^2/\partial t^2$  term is the inverse of the square of the wave speed. This coefficient is the same in both frames, so the wave speed is the same in both frames.

**37.77. IDENTIFY:** Apply conservation of total energy, in the frame in which the total momentum is zero (the center of momentum frame).

**SET UP:** In the center of momentum frame, the two protons approach each other with equal velocities (since the protons have the same mass). After the collision, the two protons are at rest—but now there are kaons as well. In this situation the kinetic energy of the protons must equal the total rest energy of the two kaons.

**EXECUTE:** (a)  $2(\gamma_{\text{cm}} - 1)m_p c^2 = 2m_k c^2 \Rightarrow \gamma_{\text{cm}} = 1 + \frac{m_k}{m_p} = 1.526$ . The velocity of a proton in the center of

momentum frame is then  $v_{\text{cm}} = c \sqrt{\frac{\gamma_{\text{cm}}^2 - 1}{\gamma_{\text{cm}}^2}} = 0.7554c$ .

To get the velocity of this proton in the lab frame, we must use the Lorentz velocity transformations. This is the same as “hopping” into the proton that will be our target and asking what the velocity of the projectile proton is. Taking the lab frame to be the unprimed frame moving to the left,  $u = v_{\text{cm}}$  and  $v' = v_{\text{cm}}$  (the velocity of the projectile proton in the center of momentum frame).

$$v_{\text{lab}} = \frac{v' + u}{1 + \frac{uv'}{c^2}} = \frac{2v_{\text{cm}}}{1 + \frac{v_{\text{cm}}^2}{c^2}} = 0.9619c \Rightarrow \gamma_{\text{lab}} = \frac{1}{\sqrt{1 - \frac{v_{\text{lab}}^2}{c^2}}} = 3.658 \Rightarrow K_{\text{lab}} = (\gamma_{\text{lab}} - 1)m_p c^2 = 2494 \text{ MeV}.$$

$$\text{(b)} \quad \frac{K_{\text{lab}}}{2m_k} = \frac{2494 \text{ MeV}}{2(493.7 \text{ MeV})} = 2.526.$$

(c) The center of momentum case considered in part (a) is the same as this situation. Thus, the kinetic energy required *is* just twice the rest mass energy of the kaons.  $K_{\text{cm}} = 2(493.7 \text{ MeV}) = 987.4 \text{ MeV}$ .

**EVALUATE:** The colliding beam situation of part (c) offers a substantial advantage over the fixed target experiment in part (b). It takes less energy to create two kaons in the proton center of momentum frame.